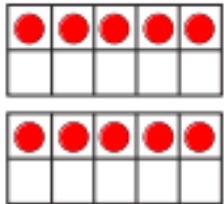


The 5 times-table

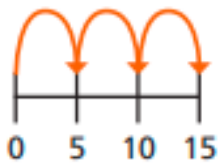
1 a) Match the picture to the times-table fact.



3×5



2×5



1×5



5×5

b) Draw a picture to show 4×5



2 a) Complete the number line.



b) Which times-table does the number line show?
Tick your answer.

1 times-table

2 times-table

5 times-table

How do you know?

3 Complete the number sentences.

a) $5 \times 5 = \square$

f) $\square = 11 \times 5$

b) $\square = 9 \times 5$

g) $5 \times \square = 5$

c) $5 \times 6 = \square$

h) $5 \times 0 = \square$

d) $5 \times \square = 40$

i) $10 = 5 \times \square$

e) $35 = \square \times 5$

j) $\square \times 5 = 60$

4 How much money does Ron have?



Complete the multiplication.

$\square \times \square = \square$

Ron has \square p.

Work out these answers:

a) $2 \times 5 =$ _____

d) $6 \times 5 =$ _____

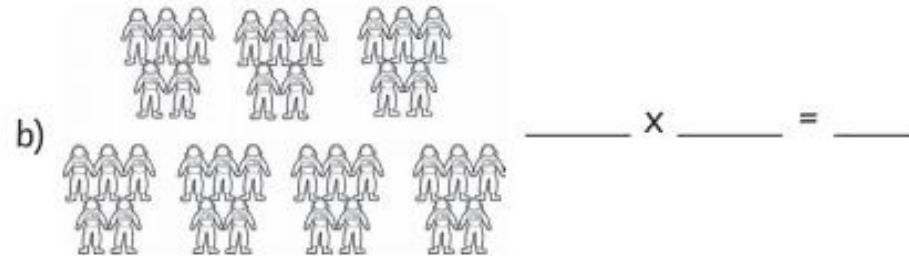
b) $4 \times 5 =$ _____

e) $7 \times 5 =$ _____

c) $5 \times 5 =$ _____

f) $9 \times 5 =$ _____

How many are there?



There are 35 fingers.
How many hands?

_____ $\times 5 = 35$

