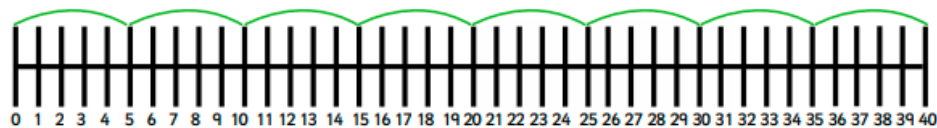
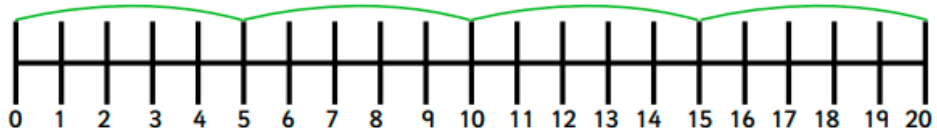
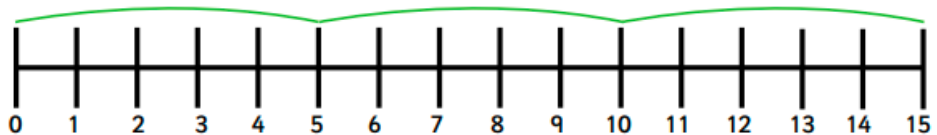
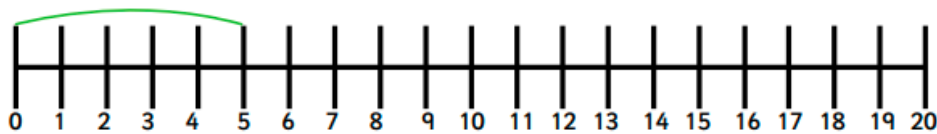
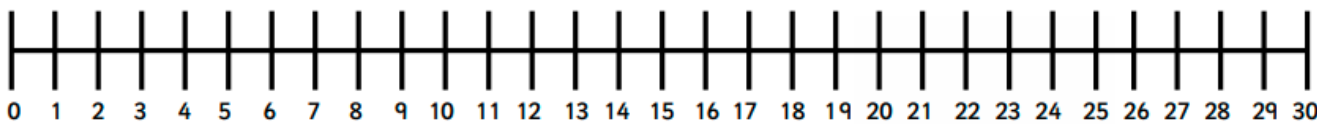



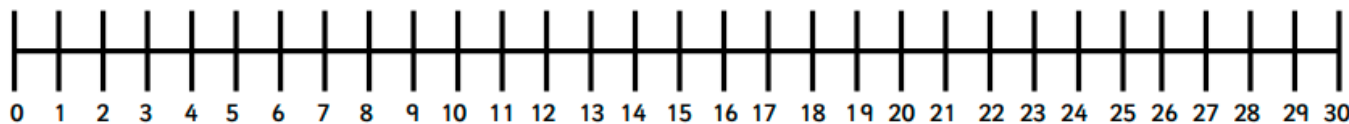
1. Join the dots to match the pictures to the number lines.



2. Can you draw jumps of 5 on the number line for the following pictures?



3. How many 5s are in 25? Can you draw the jumps?



Tubes of tennis balls come in packs of 2 and 5

Whitney has 22 tubes of balls.

How many of each pack could she have?

How many ways can you do it?

At the café, all hot chocolate toppings are 5p.



Alice chose cream, a flake and strawberry sauce.

Aman asked for marshmallows, fudge, cream and nuts.

Jin had all the toppings.

Write a calculation for each child to show how much each of them spent.

Alice's mum spent 25p on toppings.

Aman's dad spent 30p on toppings.

Jin's Grandma spent 10p on toppings.



**How many toppings did they each have?
Write a calculation for each adult.**

**What toppings would you have?
Work out the cost.**