

Find all the possible calculations using the clues.

$$2 \times \bigcirc = \square$$

The number in the circle is greater than 3.

The number in the square is less than 24.

Both numbers are even.

The number in the square is a 2-digit number.

How many wheels are there on five bicycles?

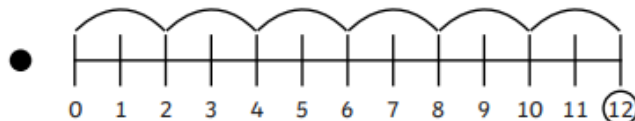


If there are 14 wheels, how many bicycles are there?

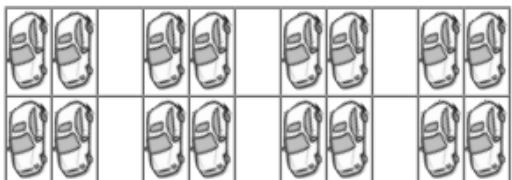
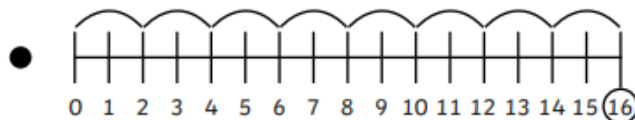
1. Can you match the picture to the number line with the matching jumps?



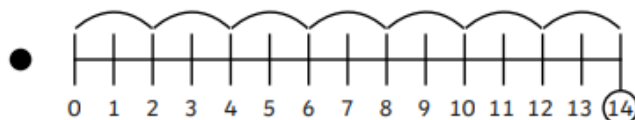
•



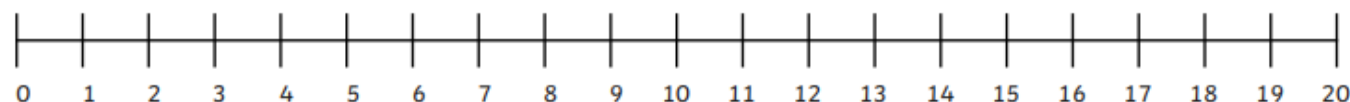
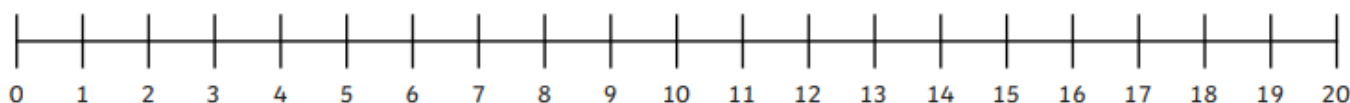
•



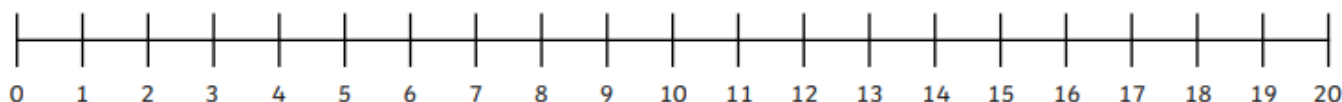
•



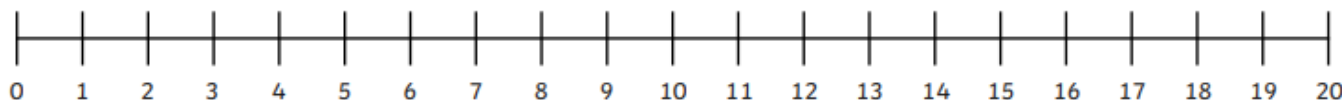
2. Can you draw jumps of 2 on the number line for the following pictures?



3. How many 2s are in 20? Can you draw the jumps?



4. What are 6 lots of 2? Can you draw the jumps?



5. I can see 8 pairs of shoes. How many shoes can I see altogether?

