

At the Market



There are 10 potatoes in a bag.



There are 5 pineapples in a crate.



There are 2 swedes in a basket.

How many potatoes does the shop have altogether?



They sell 3 bags. How many now?

How many pineapples does the shop have altogether?






They sell 2 crates. How many now?

How many swedes does the shop have altogether?



They sell 3 baskets. How many now?

<p>1. How many wheels would 11 motorbikes have?</p>  <p style="text-align: center;"><input type="text"/></p>	<p>2. If 7 taxis arrive at the party at the same time, each carrying 5 passengers, how many guests arrive at once?</p>  <p style="text-align: center;"><input type="text"/></p>	<p>3. While playing a dice game, Robert managed to throw nine 5s in a row. How many did he score altogether?</p> <p style="text-align: center;"><input type="text"/></p>
--	---	---

<p>4. All four judges gave the dancer a score of 10. How many did she score altogether?</p>  <p style="text-align: center;"><input type="text"/></p>	<p>5. 12 people came to the show and they each paid £5. How much were the ticket sales altogether?</p> <p style="text-align: center;"><input type="text"/></p>
--	---

Can you solve these word problems?

Read the problem carefully, underline the key information, write a number sentence and then write the answer. The first one has been done for you.

1. Six children have 5 biscuits each. How many biscuits are there altogether?

6 x 5 = 30

30 biscuits altogether

2. Three rabbits have 2 carrots each. How many carrots are there altogether?

3. Sam has three 10p pieces in his pocket. How much money does he have altogether?

4. A flower has 5 petals. How many petals do 9 flowers have?
