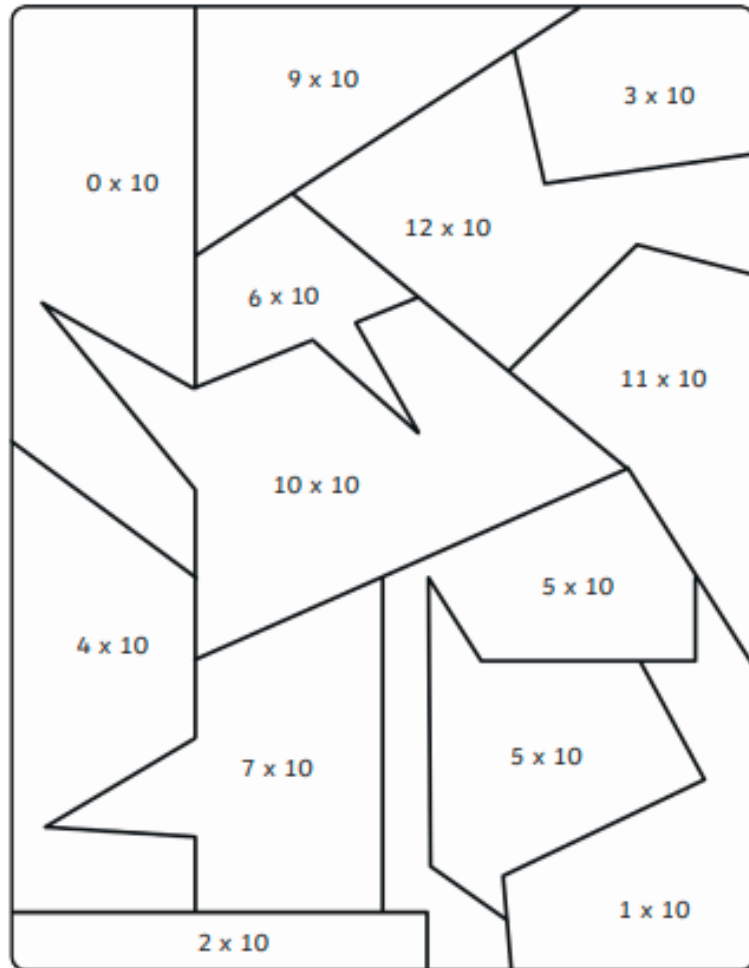


Colour by 10s Multiplication

Do the multiplication calculation and colour the shape in the correct colour.

0-20 21-40 41-60 61-80 81-100 101-120



Complete the number sentences.

a) $5 \times 5 =$

f) = 11×5

b) = 9×5

g) $5 \times$ = 5

c) $5 \times 6 =$

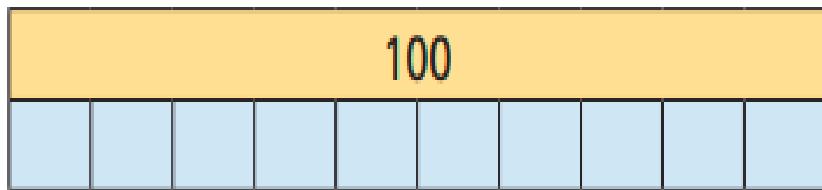
h) $5 \times 0 =$

d) $5 \times$ = 40

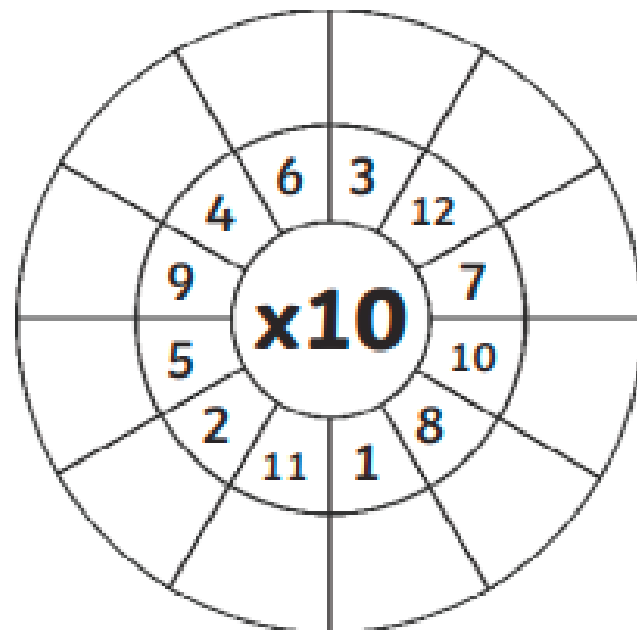
i) $10 = 5 \times$

e) $35 =$ $\times 5$

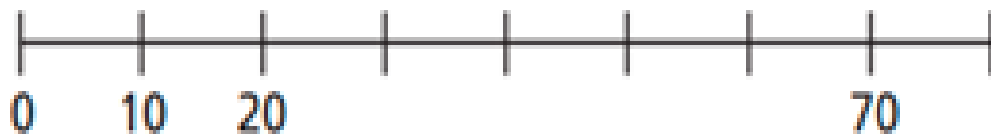
j) $\times 5 = 60$



$$\square \times \square = \square$$



Complete the number line.



Eva is 7 years old.

Her gran is 10 times older.

How old is Eva's gran?

Eva's gran is years old.