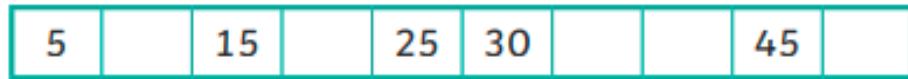


Complete the number track.



How many marshmallows are on the 7 cakes?



Write the multiplication calculation:

How much money is shown here in total?



Write the multiplication calculation:

Alice has 50p. How many 5ps is that?  
Use the calculation to help.

$$50p = \underline{\quad} \times 5p$$



Complete the number sentences.

a)  $5 \times 5 = \square$

f)  $\square = 11 \times 5$

b)  $\square = 9 \times 5$

g)  $5 \times \square = 5$

c)  $5 \times 6 = \square$

h)  $5 \times 0 = \square$

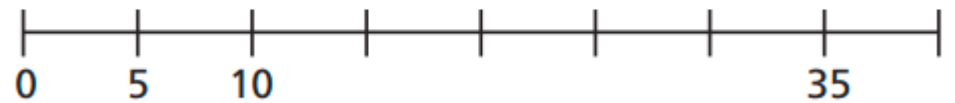
d)  $5 \times \square = 40$

i)  $10 = 5 \times \square$

e)  $35 = \square \times 5$

j)  $\square \times 5 = 60$

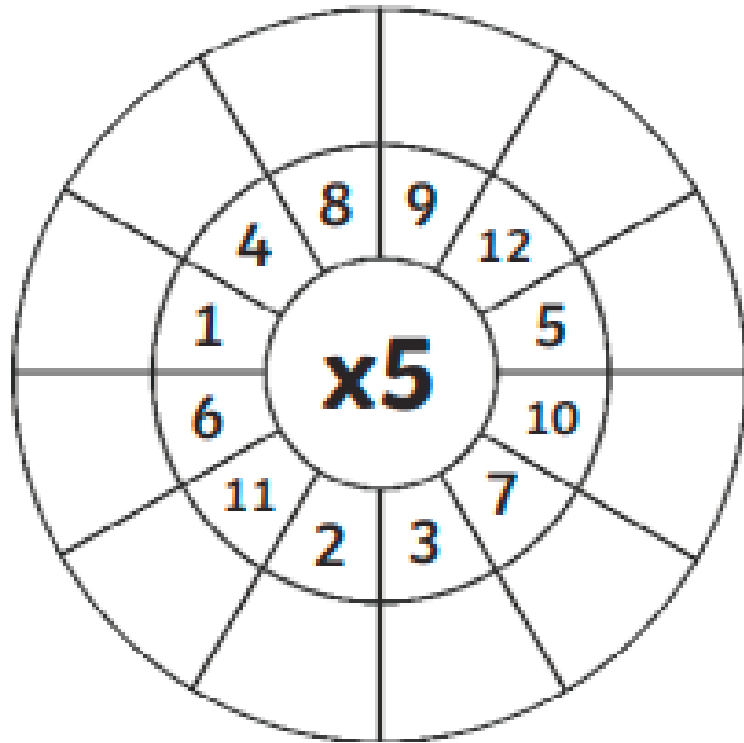
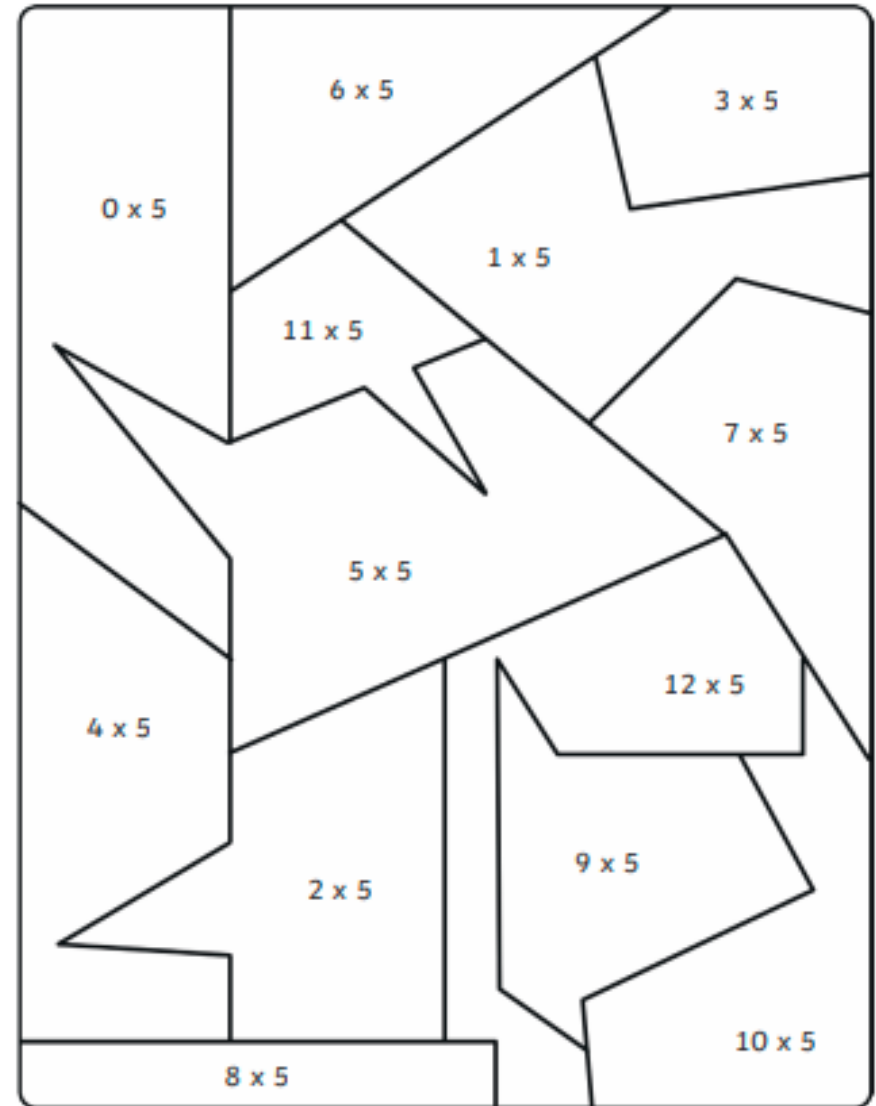
a) Complete the number line.



## Colour by 5s Multiplication

Do the multiplication calculation and colour the shape in the correct colour.

0-10    11-20    21-30    31-40    41-50    51-60



Use  $<$ ,  $>$  or  $=$  to make the statements correct.

$2 \times 5$  ○  $5 \times 2$

$3 \times 2$  ○  $4 \times 5$

$10 \times 5$  ○  $5 \times 5$