



Year 1
Mental Maths and
IXL
Week 2



Question 1

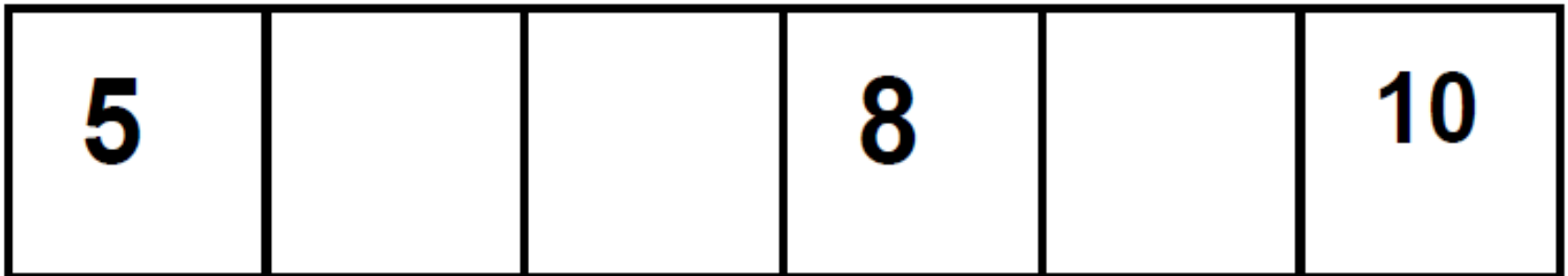
How many bikes are there on your sheet?



Write or say or your
answer

Question 2

Look at this number track. Put the numbers 7 and 9 in the correct place on the track.




Question 3

If I had 6p and I spent 4p on some sweets. How much would I have left?



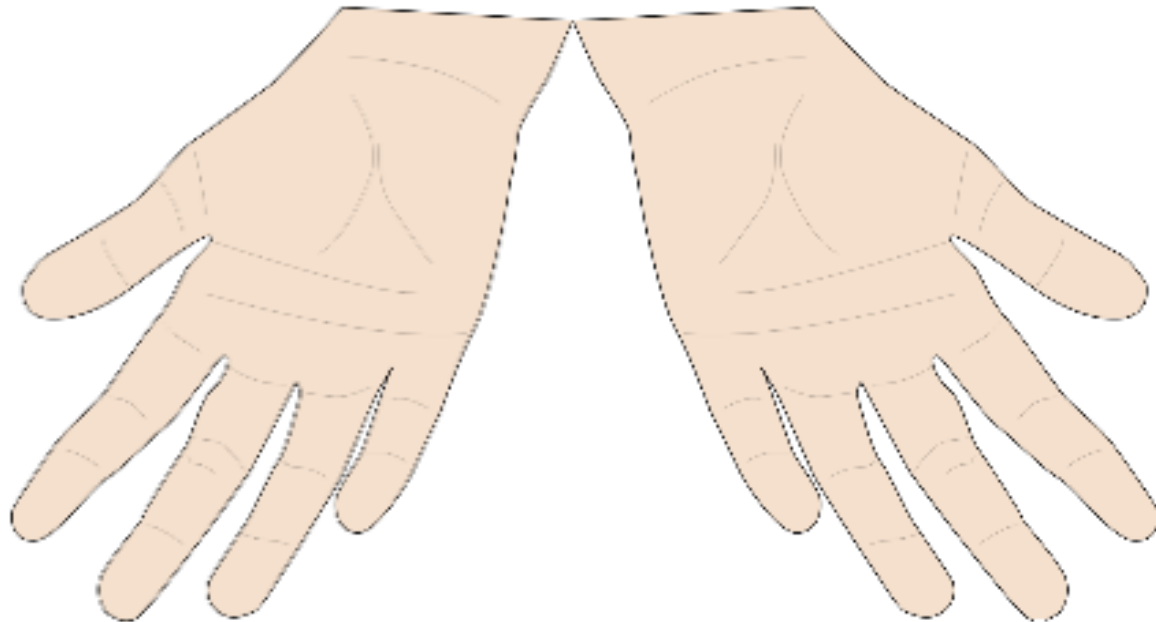
Question 4

There are 4 beads on my string. How many more will I need to make 8 beads altogether?



Question 5

How many fingers are there on 2 hands?



Question 6

A cat weighs 16 cubes. A dog weighs 18 cubes.

Which animal is heavier? Put a tick next to the heavier animal



16 cubes




18 cubes

Question 7

Sam had **4** apples and his friend had **3** apples.

How many apples

together?



Question 8

7 take away 2

Question 9

What do I have to add to
4 to make 7?

Question 10

Write a number greater
than 9



- W.5 Hexagons
- W.6 Select the 2d shapes
- W.7 Count sides and corners
- W.8 Compare sides and corners