



Year 1  
Mental Maths and IXL  
Week 1


## Question 1

1. What number comes after  
6?

## Question 2




2. Write or say the missing number

5, 6, 7, 8,



# Question 3

Count how many envelopes. Say  
or write your answer.



## Question 4

What number comes before 9?

## Question 5

What is the total of 4 and  
2?

## Question 6

Write or say the next two  
numbers

8, 7, 6, 5, ,


## Question 7

What is 4 take away 1?



# Question 8

Put a ring around the fourth  
dog.



## Question 9

I have 4 cakes. I give 2 away.  
How many are left?



# Question 10

Count how many claps



Can you create some maths challenges like these for someone in your family?





- W.1 Name the 2D shape
- W.2 Circles
- W.3 Triangles
- W.4 Squares and rectangles