

Year 1
Mental Maths and IXL
Week 5



- E.4 Count in groups of tens
- E.5 Count to 100
- F.6 Learn to skip count by tens
- F.7 Skip count by tens

Question 1

$$\square + \square = 5$$

Question 2

What is 10 take away 6?

Question 3

What is 3 less than 9

Question 4

There were 11 apples in a bag. I ate 2 of them. How many were left?



Question 5

I went on holiday for 5 days with my sister and 3 more days with my mum.

How many days was I on holiday altogether?

**5 with my sister
3 with my mum**

Question 6

There are 9 children in the book corner. Five go and play in the home corner.

How many children are left in the book corner?

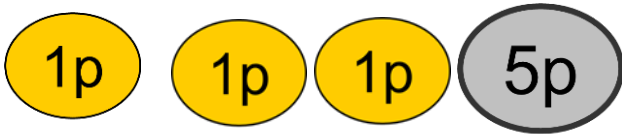


Question 7

What is 13 subtract 11?


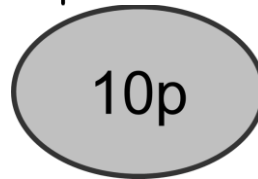
Question 8

If I had a 5p piece and 3 1 pence pieces. How much will I have altogether?



Question 9

I went to the shop with 10p. I spent 5p. How much have I left?



Question 10

A bar of chocolate is 5p. How much is two bars?

