



Year 1  
Mental Maths and IXL  
Week 4



Question 1

Write a number **more than** 12.

Question 2

Write a number **less than** 16.

Question 3

What number comes between 8 and 10?

Question 4

Put a ring around the largest number

**11 8 16 19 14**

## Question 5

---

**0**

**10**

## Question 6

Which is more 13p or 23p. Put a tick next to the correct box.


**23p**

**13p**

## Question 7

- A boy has 3 apples. His friend has got four more than him. How many apples has his friend?

 **3 apples**

 **4 more apples**

## Question 8



## Question 9

How many days are there in one week?

## Question 10

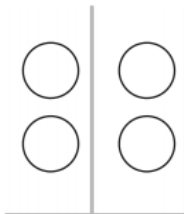
- If I have 1 less cake than my friend who has 15 cakes.
- How many cakes do I have?



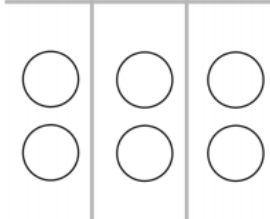


- E.1 Count on tens frames
- E.3 Count on tens and ones - up to 30
- E.4 Count groups of ten
- F.2 Skip count by twos
- F.3 Skip count by twos on tens frames

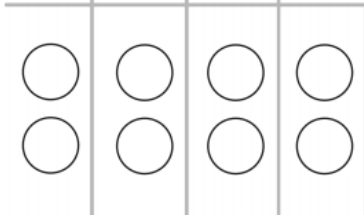
### Counting in 2s Addition Worksheet



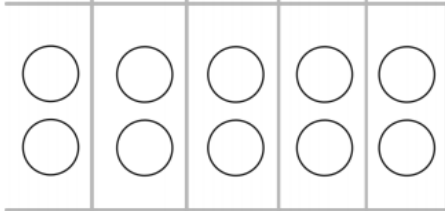
$$2 + 2 =$$



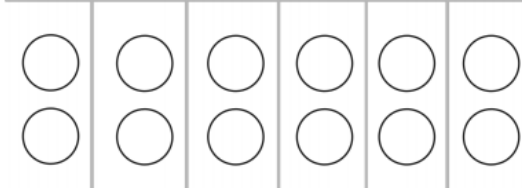
$$2 + 2 + 2 =$$



$$2 + 2 + 2 + 2 =$$



$$2 + 2 + 2 + 2 + 2 =$$

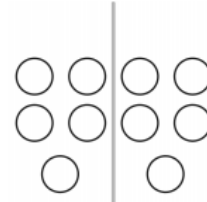


$$2 + 2$$

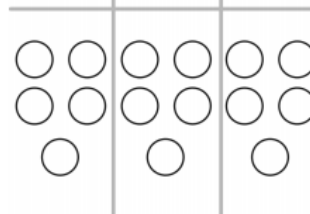
$$+ 2 + 2$$

$$+ 2 + 2 =$$

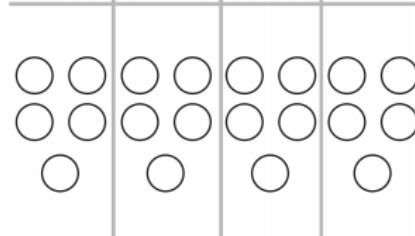
### Counting in 5s Addition Worksheet



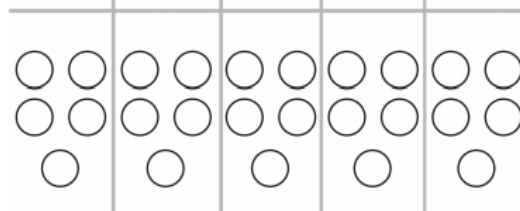
$$5 + 5 =$$



$$5 + 5 + 5 =$$

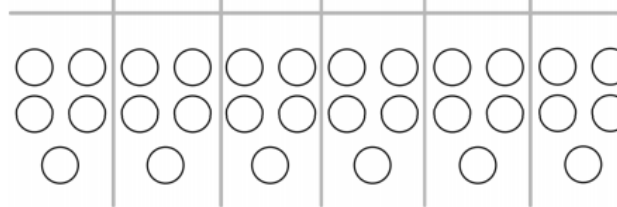


$$5 + 5 + 5 + 5 =$$



$$5 + 5 + 5$$

$$+ 5 + 5 =$$




$$5 + 5$$


$$+ 5 + 5$$

$$+ 5 + 5 =$$


## Counting in 10s Addition Worksheet




$$10 + 10 =$$




$$10 + 10 + 10 =$$



$$10 + 10 + 10 + 10 =$$



$$10 + 10 + 10 + 10 + 10 =$$



$$10 + 10 + 10 + 10 + 10 + 10 =$$

## Filling in Missing Numbers on a Number Line

The number lines below are not quite complete. See if you can use a hundred square or your knowledge of the number system and fill in the missing numbers.

1.	
2.	
3.	
4.	
5.	
6.	
7.	
8.	
9.	
10.	

Challenge - Can you create a number line for the next set of numbers after 100?



