

12

13

14

0

1

2

15

16

17

3

4

5

18

19

20

6

7

8

21

22

23

9

10

11

36

37

38

24

25

26

39

40

41

27

28

29

42

43

44

30

31

32

45

46

47

33

34

35







48


49

50




Can I use numicon to understand place value? Can I understand how many tens and ones make up numbers 11-20? 28.1.21






This is _____

It has _____ ten and _____ ones.



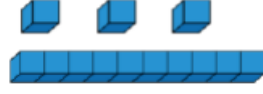
This is _____

It has _____ ten and _____ ones.



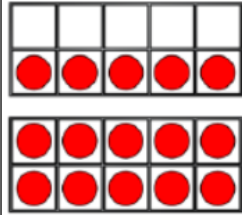
This is _____

It has _____ tens and _____ ones.



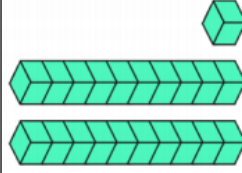
This is _____

It has _____ ten and _____ ones.




This is _____

It has _____ ten and _____ ones.



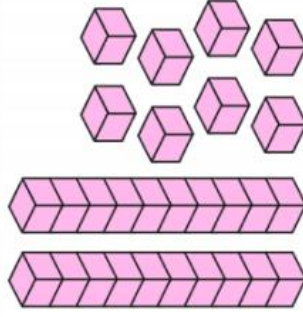
This is _____

It has _____ ten and _____ ones.



This is _____

It has _____ tens and _____ ones.




This is _____

It has _____ tens and _____ ones.




Can I show my understanding of the place value of two-digit numbers? 28.1.21



This is _____

It has _____ ten and _____ ones.


_____ = _____ + _____



This is _____

It has _____ ten and _____ ones.


_____ = _____ + _____



This is _____

It has _____ tens and _____ ones.

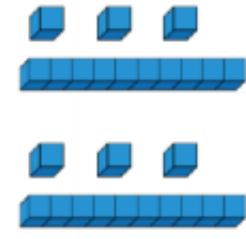
_____ = _____ + _____



This is _____

It has _____ tens and _____ ones.

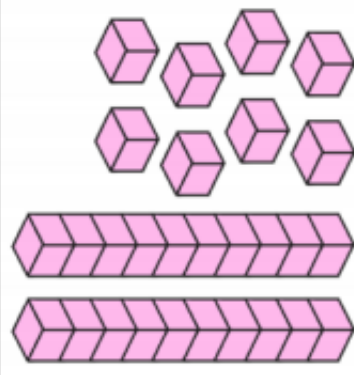
_____ = _____ + _____



This is _____

It has _____ ten and _____ ones.

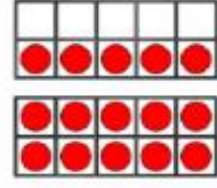
_____ = _____ + _____



This is _____

It has _____ tens and _____ ones.

_____ = _____ + _____



This is _____

It has _____ ten and _____ ones.

_____ = _____ + _____



This is _____


It has _____ ten and _____ ones.

_____ = _____ + _____



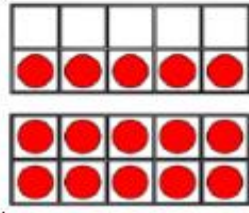
This is _____

It has _____ ten and _____ ones.




This is _____

It has _____ ten and _____ ones.



This is _____

It has _____ tens and _____ ones.



This is _____

It has _____ ten and _____ ones.



This is _____

It has _____ tens and _____ ones.



This is _____

It has _____ ten and _____ ones.

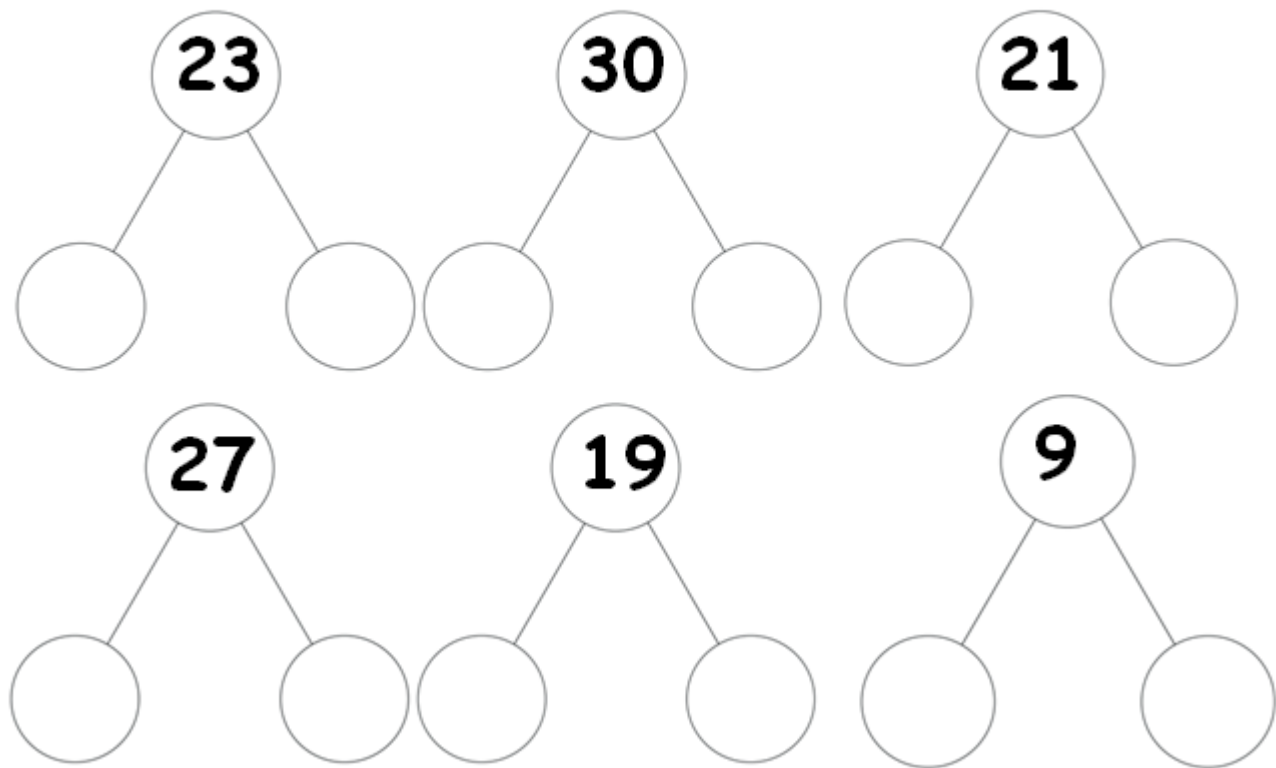


This is _____

It has _____ tens and _____ ones.



Can I partition 2 digit numbers into 10s and ones? 29.1.21




Circle the numbers that have 2 in the ones place.

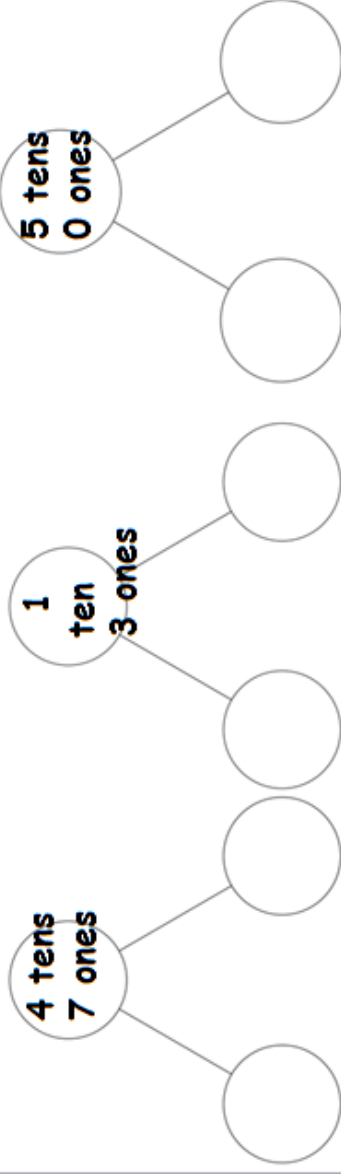
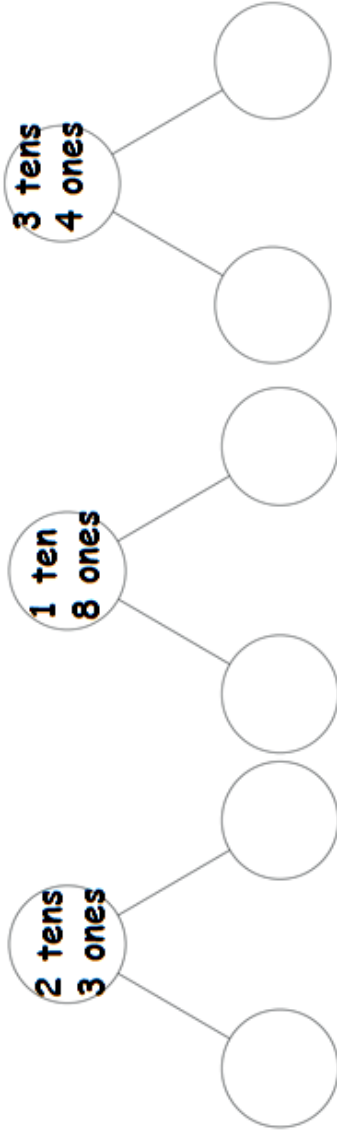
23 18 22 29 12 30 2

Circle the numbers that have 7 in the ones place.


23 17 22 29 12 30 7



Can I partition 2 digit numbers into 10s and ones? 29.1.21



Order the numbers from the smallest to the biggest:



Circle the numbers that have 2 in the ones place.

23 18 22 29 12 30 2

Circle the numbers that have 1 in the tens place.

13 18 22 29 12 25 2

Circle the numbers that have 7 in the ones place.

23 17 22 29 12 30 7

Circle the numbers that have 2 in the tens place.

23 18 22 29 12 30 2