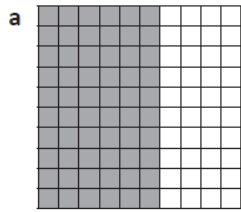


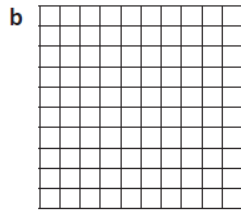
13/01/2021

LO: To write percentages as a fraction with denominator 100, and as a decimal fraction.

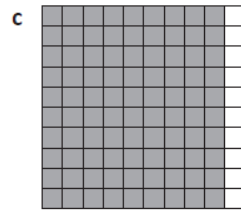
Fill in the missing values:



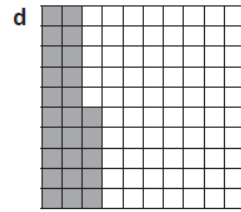
$\frac{60}{100}$ 0. %




$\frac{30}{100}$ 0.3 %




— 0. 90%



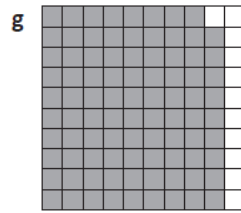
— 0.25 %



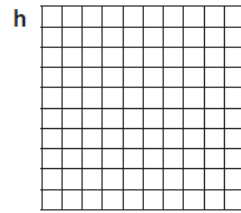
$\frac{45}{100}$ 0. %



— 0.75 %




— 0. %



— 0.5 %

1



What percentage of the rectangle is shaded _____ **not** dotted _____ shaded **and** dotted? _____

2 Write as a percentage.

0.34 _____ 0.05 _____ 0.60 _____
 $\frac{7}{100}$ _____ $\frac{86}{100}$ _____ $\frac{1}{100}$ _____

3 Write in **two** other ways.

45% _____ $\frac{18}{100}$ _____
 9% _____ 0.20 _____ $\frac{1}{100}$ _____

4 Write the percentage of each dog food which is **not** chicken.





5 What percentage of the goldfish are **not**

Fantails _____
 Lionheads _____
 Fantails or Lionheads? _____

