

01/02/21 - Mild

LO: To describe positions on a co-ordinate grid.

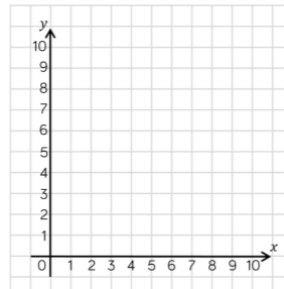
Which is the x -axis?

Which is the y -axis?

In which order do we read the axes?

Does it matter in which order we read the axes?

Draw the shapes at the correct points on the grid.



 (7, 8)

 (4, 6)

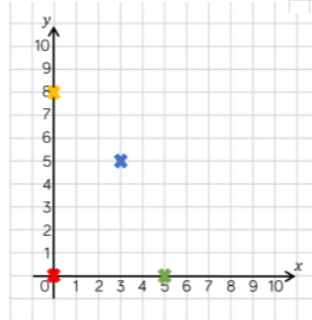
 (9, 1)

 (10, 0)

Write the coordinates for the points shown.

 (__, __)  (__, __)

 (__, __)  (__, __)



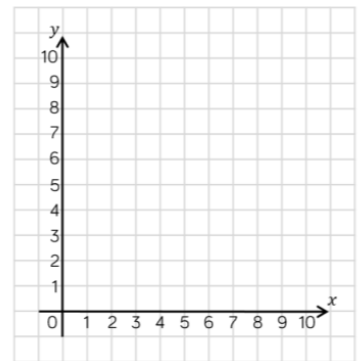
Plot the following points on the grid.

(3, 5)

(4, 4)

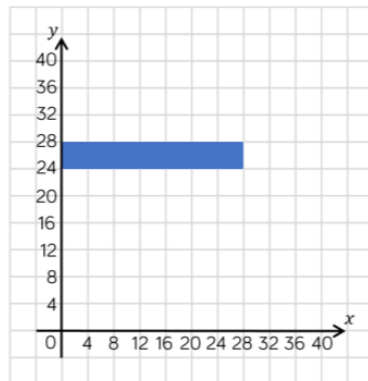
(0, 2)

(4, 0)

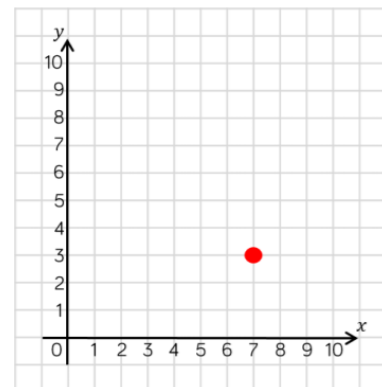
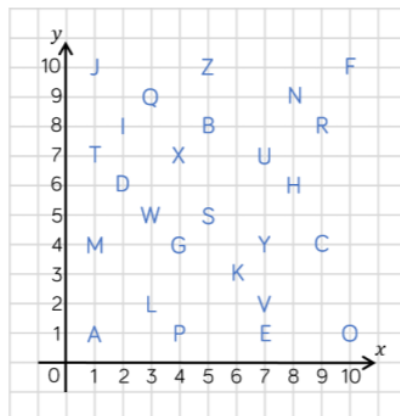


What are the coordinates of the vertices of the rectangle?

(,) (,)
(,) (,)



Write out the coordinates that spell your name.



The point is plotted at (7, 3)



Teddy



Rosie

The point is plotted at (3, 7)

Who is correct?

What mistake has one of the children made?