

LO To count from 0 in different multiples

There are 4 corn cobs in each bag. How many have I bought altogether?



There are 8 broccoli florets in each bag. How many have I bought altogether?



I'm counting in a sequence. I say the number 24
This means I could be counting in steps of 4 or 8. True or False?
Explain your answer.

There are 50 marbles in each jar. How many marbles are there altogether?



There are 100 sharpeners in each box. How many sharpeners are there altogether?



I order the amount below. I send 3 boxes back. How many sharpeners do I have now?



I have 900 sharpeners. How many boxes do I have?





LO To count from 0 in different multiples


1 What numbers are shown below?

(a)  

(b)  

(c)  

2 Complete the number patterns.

(a) 4000, 5000, , 7000, , , 10 000

(b) 9000, 8000, 7000, , , 4000, 3000

(c) 2000, 4000, 6000, , 

Find the next two numbers:

6, 12, 18, 24, _____, _____

7, 14, 21, 28, 35, _____, _____

9, 18, 27, 36, _____, _____

I'm counting in a sequence. I say the number 36.
This means I could be counting in steps of 4 or 8. True or False?
Explain your answer.

There are 50 marbles in each jar. How many marbles are there altogether?



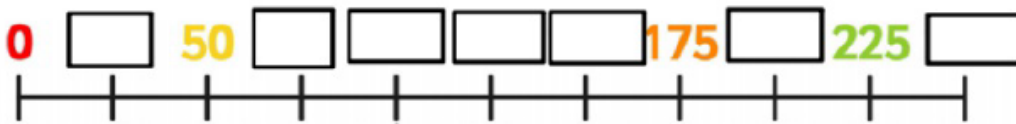
LO To count from 0 in different multiples

Mya counts in 9's from 540.

Circle the numbers she will say.


549 558 567 577 585 594

Complete the number line




True or false?

Sophie



950, 975, 1000, 1250 What is wrong with this sequence of numbers?
Explain your answer.

Which of these numbers are multiples of 5?



Write two multiples of 5 that are greater than 150.

Circle the mistake in each sequence.

2,275, 2,300, 2,325, 2,350, 2,400...

1,000, 975, 925, 900, 875....

Explain where the mistake is.