




- 1 Anna has made a number.

Hundreds	Tens	Ones
		

What number has Anna made?

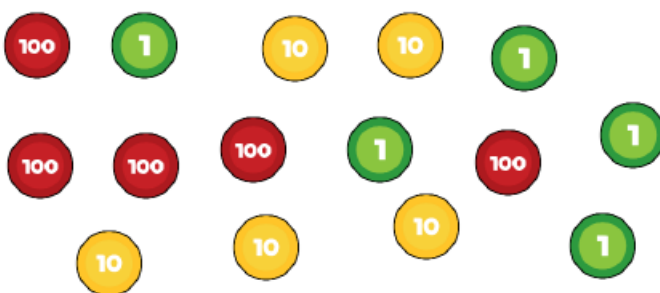
Is the number odd or even?

How do you know?

- 2 Circle the number that has the digit 7 in the tens column.

725 572 257

- 3 Max is making a number using some counters.
Max chooses 6 counters.
He makes a number greater than 300
Circle the counters Max could have chosen.



- 4 Match the numbers.

Six hundred and six 676

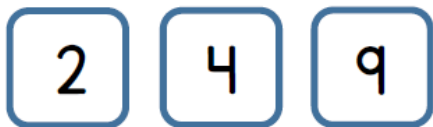
Six hundred and sixty 606

Six hundred and seventy-six 660

- 5 Complete the missing numbers.

255	265	275				
-----	-----	-----	--	--	--	--

- 6 Here are some digit cards.



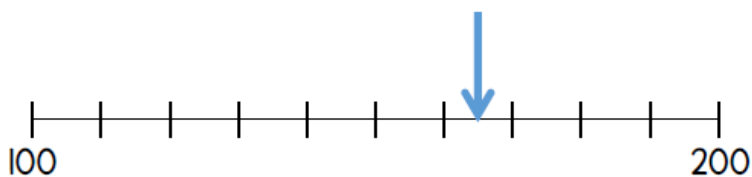
Max uses the cards to make a 3 digit number.
Write down all the numbers between 250 and 550 Max can make.

- 7 What is 100 less than 719? _____

What is 10 more than 97? _____

What is 10 less than 205? _____

- 8 What number is the arrow pointing to?



- 9 How many tens are there in 500?

