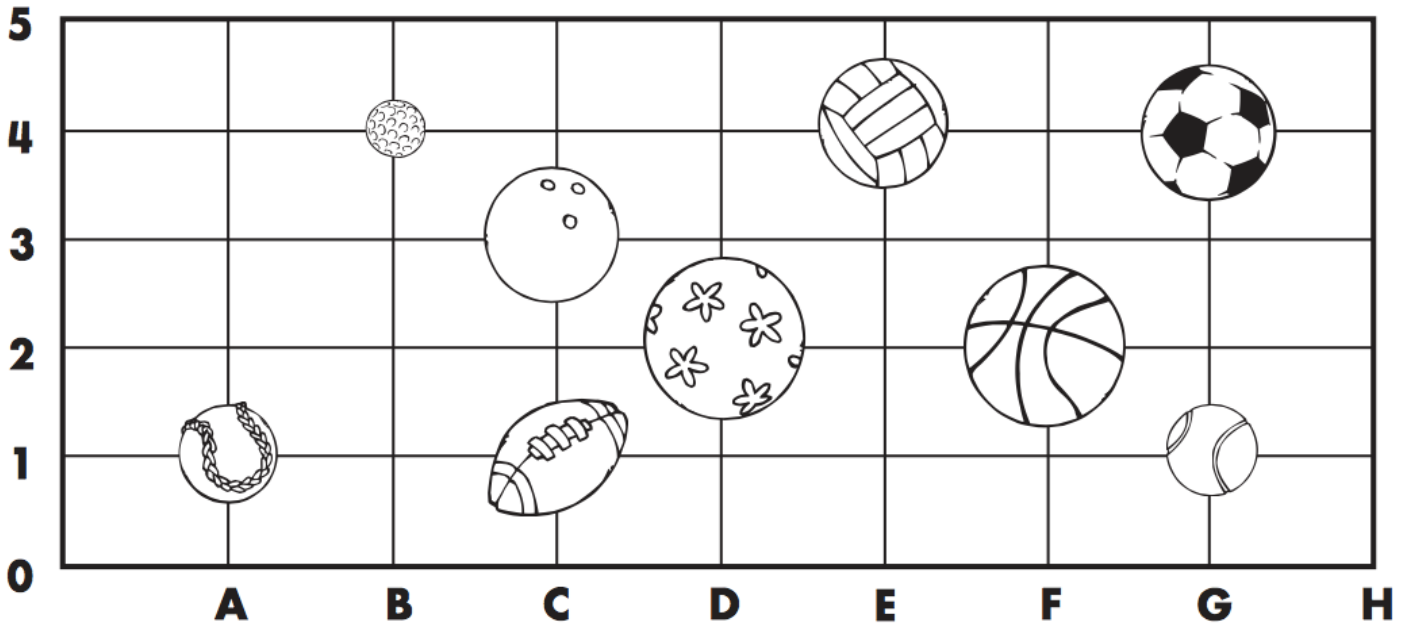


LO To read co-ordinates on a grid



Write the location of each ball.

1.  (A, 1)

2.  _____


3.  _____

4.  _____

5.  _____

6.  _____

7.  _____

8.  _____

9.  _____

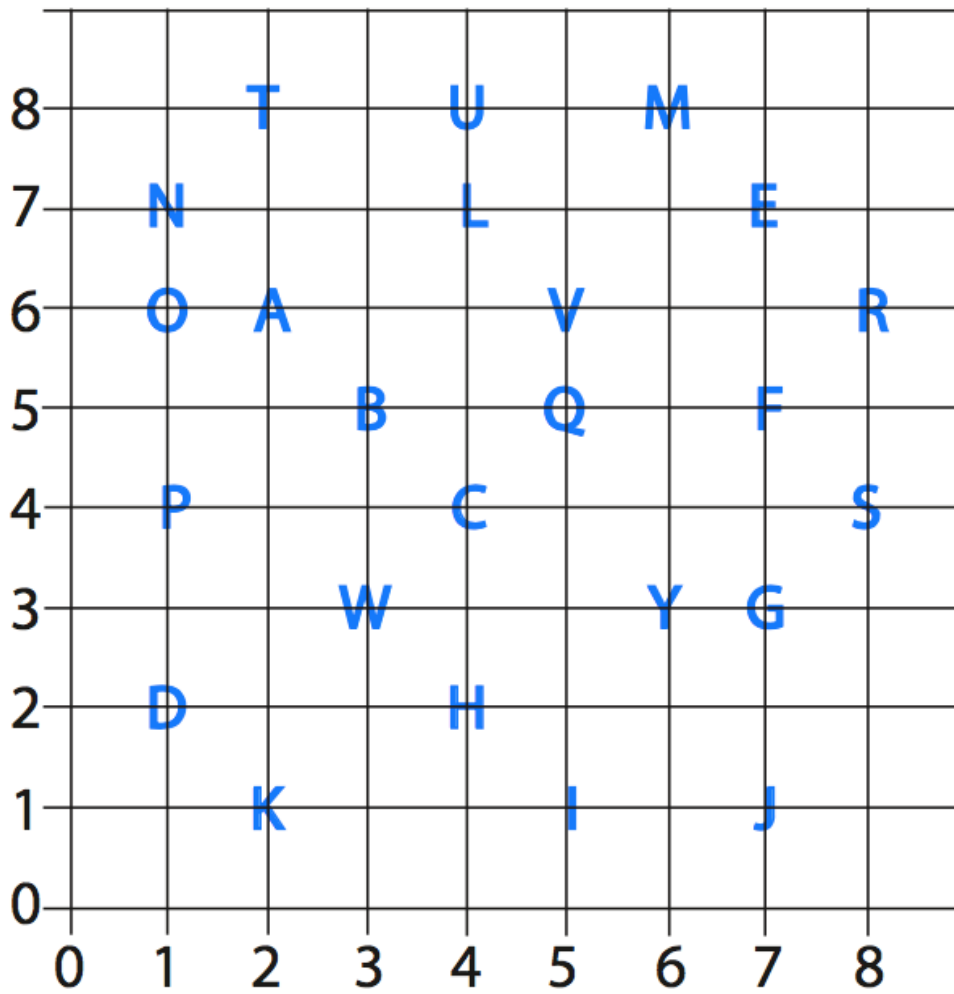
Challenge

Can you draw on a new ball and get someone to write the co-ordinate?

2.2.2021

Spicy

LO To read co-ordinates on a grid



Can you work out the hidden message?

(6,3) (1,6) (4,8)

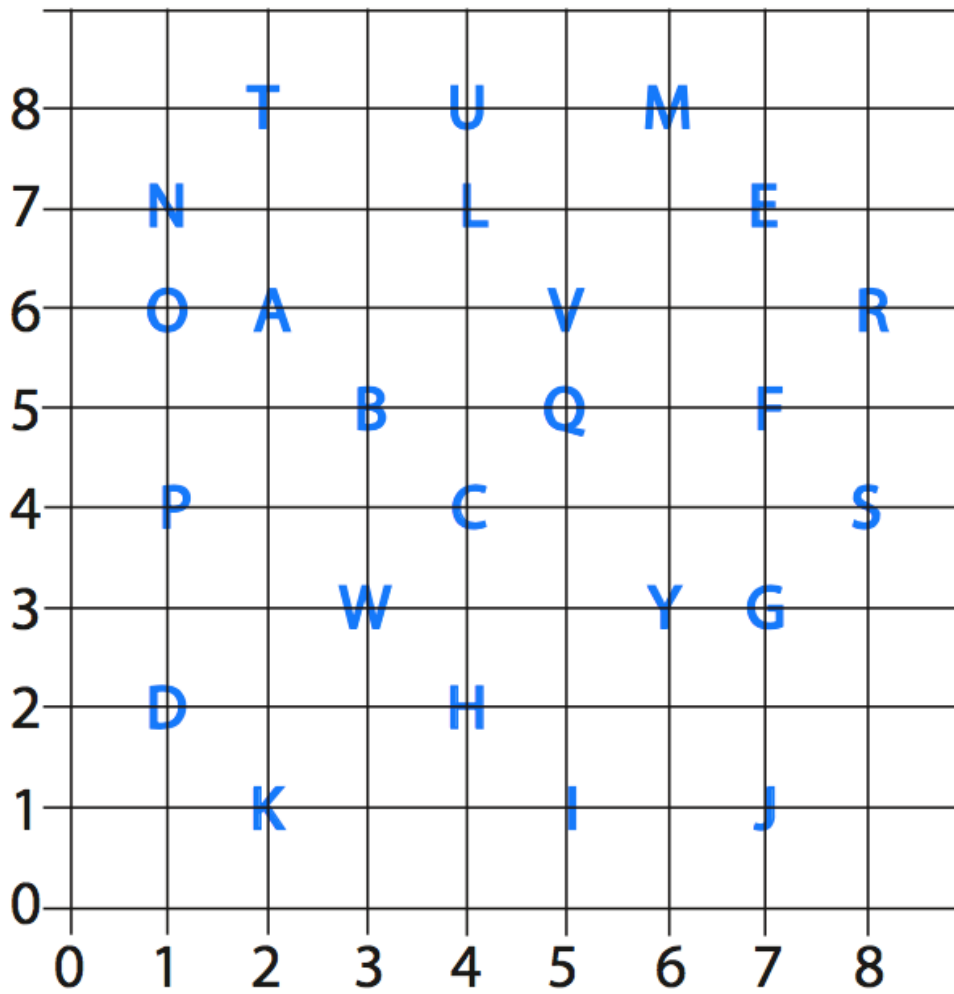
(4,2) (2,6) (5,6) (7,7)

(7,5) (8,6) (7,7) (7,7)

(2,8) (5,1) (6,8) (7,7)

(2,8) (1,6) (6,8) (1,6) (8,6) (8,6) (1,6) (3,3)

LO To read co-ordinates on a grid



Can you work out the hidden message?

(6,3) (1,6) (4,8)

(4,2) (2,6) (5,6) (7,7)

(7,5) (8,6) (7,7) (7,7)

(2,8) (5,1) (6,8) (7,7)

(2,8) (1,6) (6,8) (1,6) (8,6) (8,6) (1,6) (3,3)

Challenge

Write some co-ordinates to spell out a word or sentence for Mrs Summerbell to work out.