





KEY


 Try mentally first

 Try a written method


 A.  $83 + 8 =$

 B.  $67 + 34 =$

 C.  $20 - 7 =$


 D.  $78 + 10 =$


KEY


 Try mentally first

 Try a written method

 A.  $186 + 7 =$

 B.  $467 + 334 =$

 C.  $3 \times 7 =$

 D.  $14 \times 3 =$