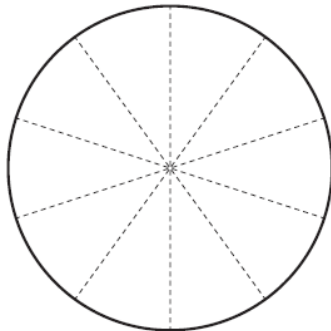


01.03.21 - Mild

LO: To interpret pie charts and use this to solve problems.

Colour and label this pie chart according to the information in the table:

Favourite colours of 10 people



Category	Amount	Fraction
Red	3	
Blue	2	
Yellow	5	
Total		

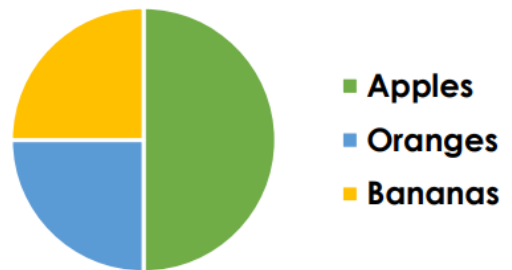
What fraction of the pie chart represents people who chose squash?

Favourite Drink



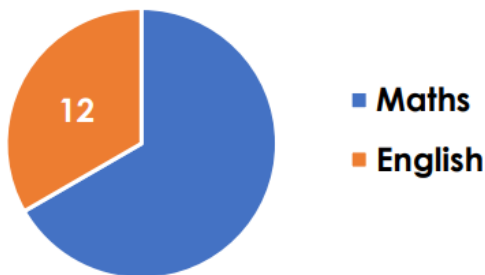
What fraction of the pie chart represents people who chose oranges?

Favourite Fruit



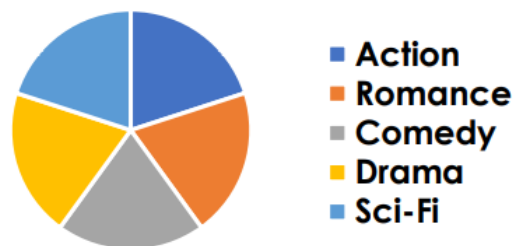
The pie chart shows the votes of 36 people. Find the missing value.

Favourite School Subject



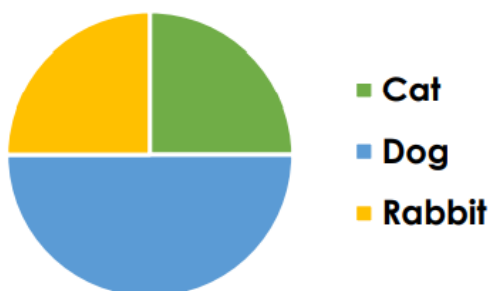
100 people took part in a survey about films. How many people does each segment represent?

Favourite Film Type



How many people from the 40 surveyed chose each pet type?

Favourite Pet



Seth has forgotten what fraction of the pie chart should be given to 'King of the Ring'. Can you work out the fraction from the information below?

Favourite Book	
King of the Ring	?
Larry Trotter	20
Thunder Games	10
Total	40 people