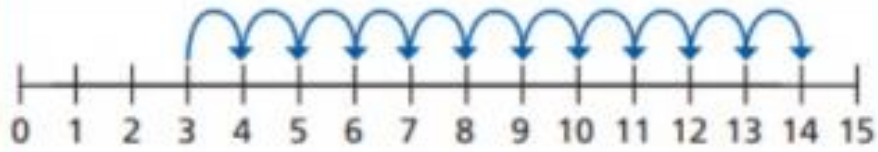
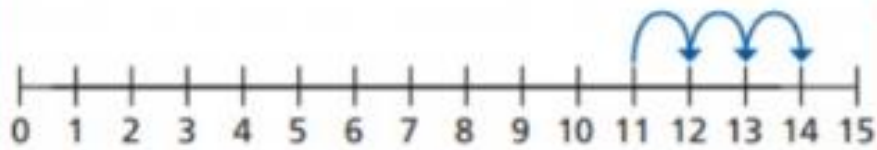


Ron and Mo are working out  $3 + 11$  on a number line.

**Ron's method**

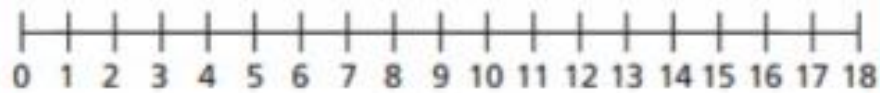


**Mo's method**



What is the same and what is different?

Use a number line to work out the additions.



a)  $2 + 13$

b)  $4 + 9$

c)  $1 + 17$