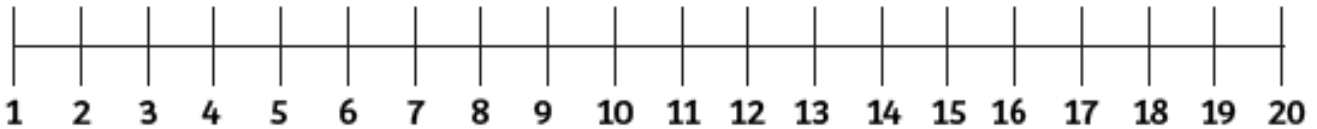


Adding equal groups

3. Draw arrows on the number line to represent the amount of cars.



Complete the sentences.

There are groups of cars.

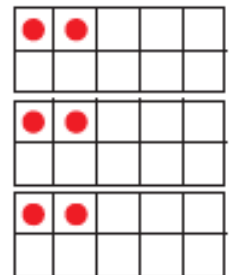
$$\square + \square + \square = \square$$

There are cars altogether.

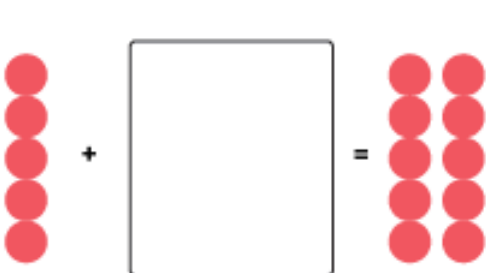
4. Circle the odd one out.



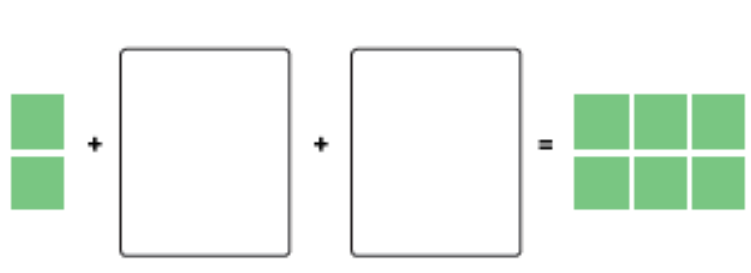
$$2 + 2$$



5. Draw the correct amount of counters in the boxes and complete the sentences.



$$5 + \square = \square$$



$$2 + \square + \square = \square$$