

Name _____



1

Monster Babies Multiplication Arrays


Directions: Write a multiplication sentence to match each array.

1.




$$\underline{\quad} \times \underline{\quad} = \underline{\quad}$$

2.




$$\underline{\quad} \times \underline{\quad} = \underline{\quad}$$

3.



$$\underline{\quad} \times \underline{\quad} = \underline{\quad}$$

4.



$$\underline{\quad} \times \underline{\quad} = \underline{\quad}$$

5.



$$\underline{\quad} \times \underline{\quad} = \underline{\quad}$$

6.



$$\underline{\quad} \times \underline{\quad} = \underline{\quad}$$