

# Year 2 Spicy Challenge 23/2/2021


## Recognising equal groups



There are  beach balls in each group.

There are  equal groups.

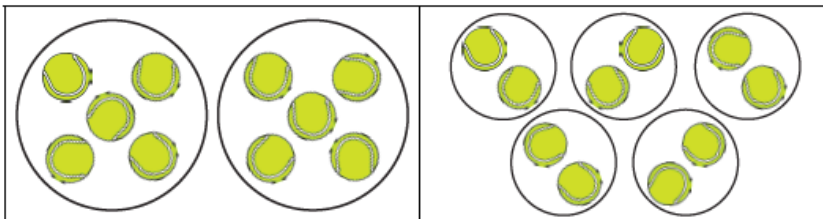
There are  beach balls altogether.



There are  balloons in each group.

There are  equal groups.

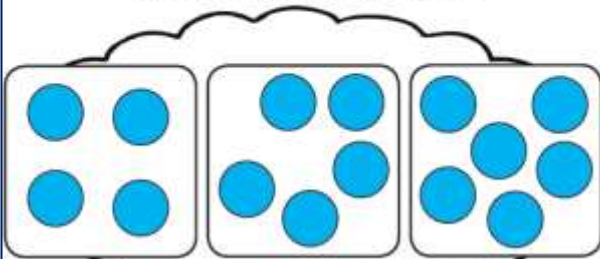
There are  balloons altogether.



What is the same and what is different about the groups in these two pictures?

Sammy has tried to group these counters equally.

What mistake has she made?




Use counters to show Sammy how to make three equal groups.

Can Sammy make two equal groups using these counters?



Which groups are Leah and Chen describing?



There are two items in each group.  
Which set am I thinking of?

There are three groups.  
Which set am I thinking of?



Leah