

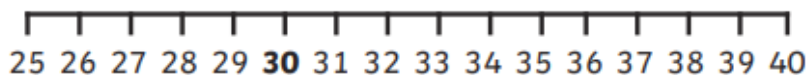
## Subtracting by counting back – crossing 10

### Subtract 1 Digit from 2 Digits

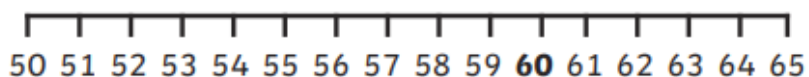


Show Jump Back Jill how she could subtract on these number lines. Remember to land on a multiple of 10 first.

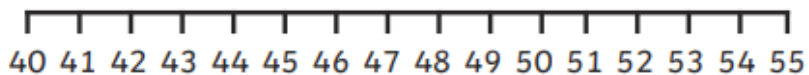
$$37 - 9$$



$$63 - 6$$



$$54 - 7$$



$$81 - 5$$

