

# Back to School Addition up to 20

Write down the answers in the circles.

10 pencils + 5 pencils =

0 1 2 3 4 5 6 7 8 9 10 11 12 13 14 15 16 17 18 19 20

A number line from 0 to 20 with tick marks every 1 unit. To the left of the number line, there are 10 yellow pencils arranged in a single row. To the right of the pencils is a plus sign. Further right are 5 yellow pencils arranged in a single row. To the right of the pencils is an equals sign. To the far right is a large empty circle for the answer.

10 chairs + 3 chairs =

0 1 2 3 4 5 6 7 8 9 10 11 12 13 14 15 16 17 18 19 20

A number line from 0 to 20 with tick marks every 1 unit. To the left of the number line, there are 10 blue chairs arranged in two rows of five. To the right of the chairs is a plus sign. Further right are 3 blue chairs arranged in two rows (two in the top row, one in the bottom row). To the right of the chairs is an equals sign. To the far right is a large empty circle for the answer.

15 sharpeners + 2 sharpeners =

0 1 2 3 4 5 6 7 8 9 10 11 12 13 14 15 16 17 18 19 20

A number line from 0 to 20 with tick marks every 1 unit. To the left of the number line, there are 15 red sharpeners arranged in three rows of five. To the right of the sharpeners is a plus sign. Further right are 2 red sharpeners arranged in a single row. To the right of the sharpeners is an equals sign. To the far right is a large empty circle for the answer.

10 pens + 10 pens =

0 1 2 3 4 5 6 7 8 9 10 11 12 13 14 15 16 17 18 19 20

A number line from 0 to 20 with tick marks every 1 unit. To the left of the number line, there are 10 green pens arranged in a single row. To the right of the pens is a plus sign. Further right are 10 green pens arranged in a single row. To the right of the pens is an equals sign. To the far right is a large empty circle for the answer.

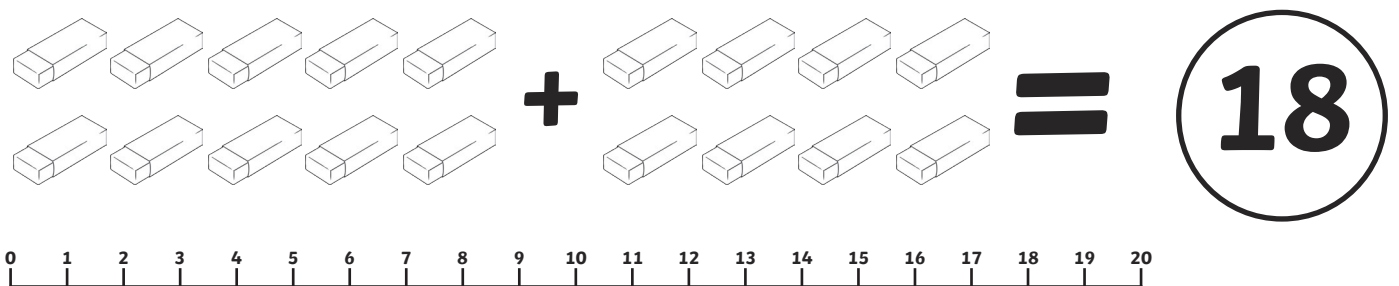
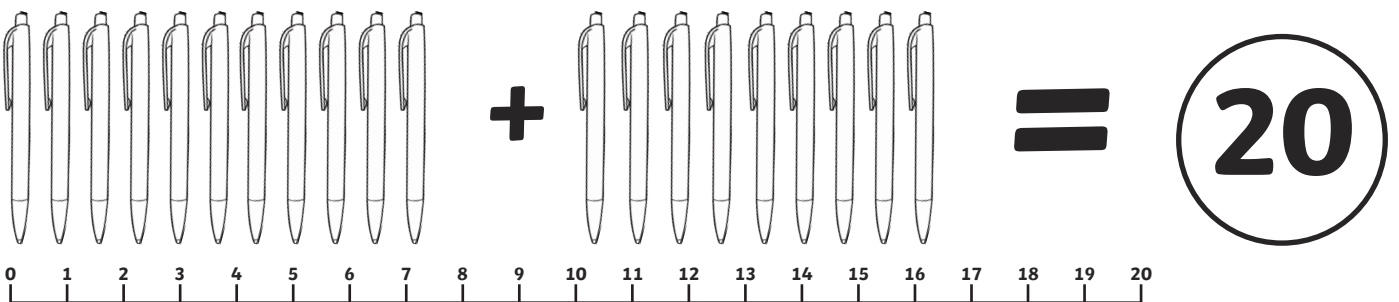
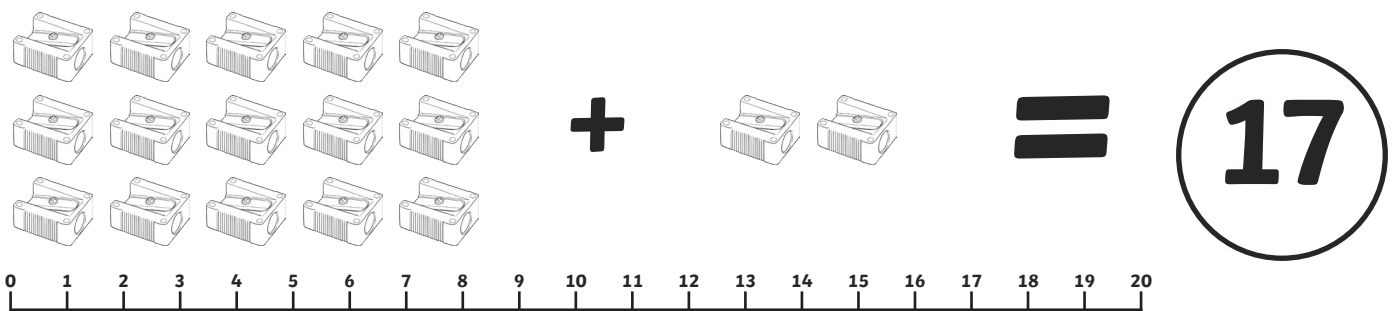
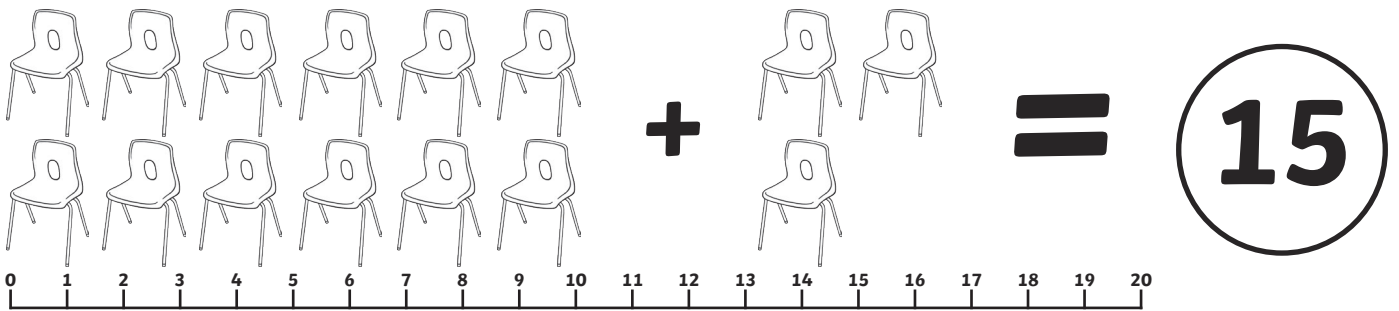
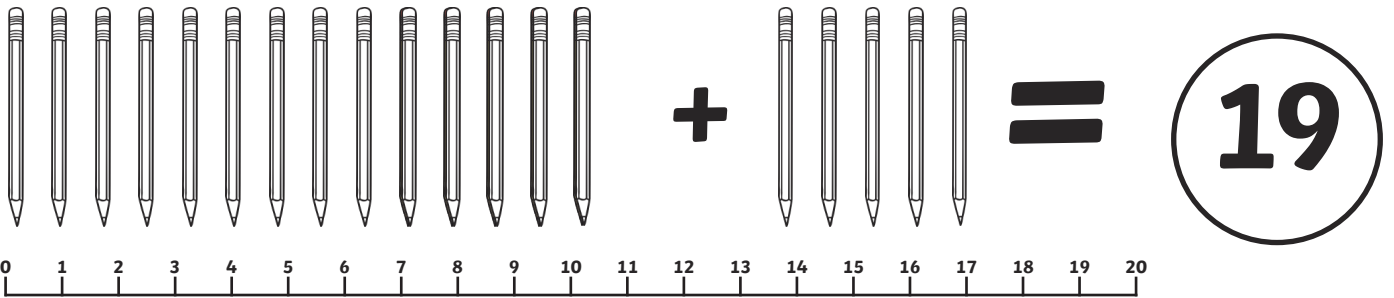
10 erasers + 8 erasers =

0 1 2 3 4 5 6 7 8 9 10 11 12 13 14 15 16 17 18 19 20

A number line from 0 to 20 with tick marks every 1 unit. To the left of the number line, there are 10 blue erasers arranged in two rows of five. To the right of the erasers is a plus sign. Further right are 8 blue erasers arranged in two rows (four in the top row, four in the bottom row). To the right of the erasers is an equals sign. To the far right is a large empty circle for the answer.

# Back to School Addition up to 20

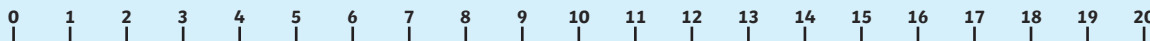
## Answers



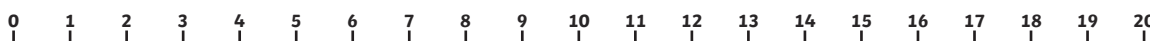
# Back to School Addition up to 20

Write down the answers in the circles.

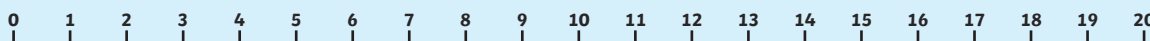
$12 + 8 =$



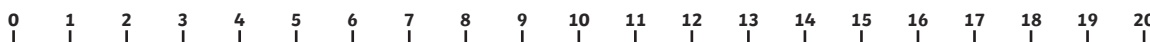
$13 + 2 =$



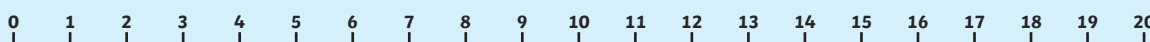
$7 + 9 =$



$11 + 6 =$



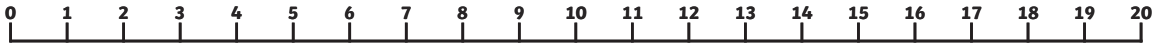
$9 + 9 =$



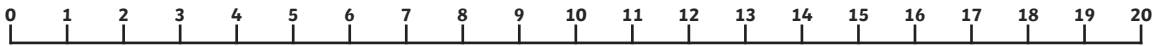
# Back to School Addition up to 20

## Answers

$$12 + 8 = 20$$



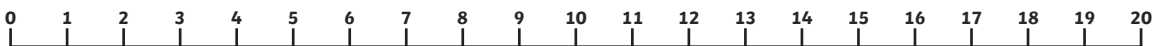
$$13 + 2 = 15$$



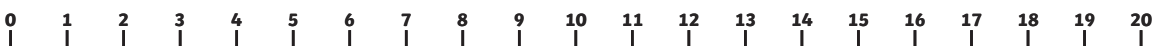
$$7 + 9 = 16$$



$$11 + 6 = 17$$



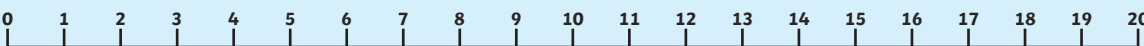
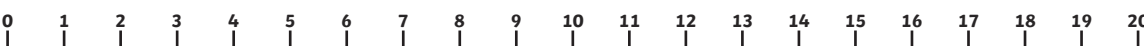

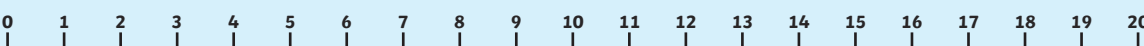
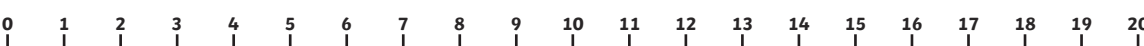
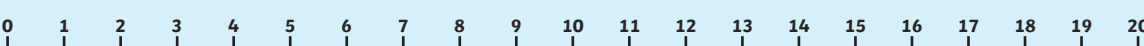


$$9 + 9 = 18$$



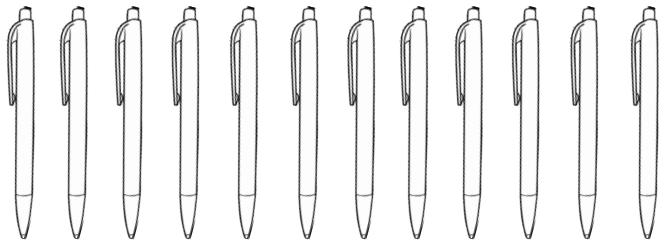
# Back to School Addition up to 20

Write down the answers in the circles.


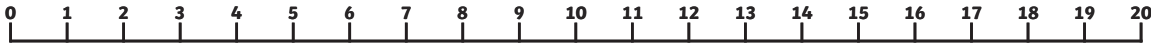
 $+ \bigcirc = 18$  $+ 12 = \bigcirc$  $6 + \bigcirc = 20$  $+ 6 = \bigcirc$  $\bigcirc + 9 = 17$ 

# Back to School Addition up to 20

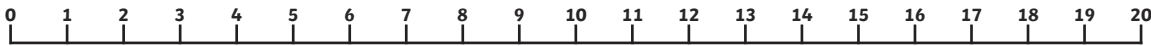
## Answers



$$+ \textcircled{6} = 18$$



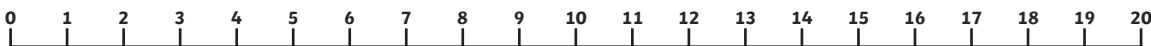
$$+ 12 = \textcircled{19}$$



$$6 + \textcircled{14} = 20$$



$$+ 6 = \textcircled{14}$$



$$\textcircled{8} + 9 = 17$$

