







































# Counting Up and Down in Tenths

Write these tenths in words and numbers. Use your answers to practise counting up and down in tenths.

Diagram	Words	Numbers
	One Tenth	$\frac{1}{10}$
		
		
		
		
		
		
		
		
	One Whole	1
		
		
		
		
		
		
		
		
		

# Counting Up and Down in Tenths

## Answers

Diagram	Words	Numbers
	One Tenth	$\frac{1}{10}$
	Two Tenths	$\frac{2}{10}$
	Three Tenths	$\frac{3}{10}$
	Four Tenths	$\frac{4}{10}$
	Five Tenths	$\frac{5}{10}$
	Six Tenths	$\frac{6}{10}$
	Seven Tenths	$\frac{7}{10}$
	Eight Tenths	$\frac{8}{10}$
	Nine Tenths	$\frac{9}{10}$
	One Whole	1
	Nine Tenths	$\frac{9}{10}$
	Eight Tenths	$\frac{8}{10}$
	Seven Tenths	$\frac{7}{10}$
	Six Tenths	$\frac{6}{10}$
	Five Tenths	$\frac{5}{10}$
	Four Tenths	$\frac{4}{10}$
	Three Tenths	$\frac{3}{10}$
	Two Tenths	$\frac{2}{10}$
	One Tenth	$\frac{1}{10}$