


# St. George's Day Maths Challenge Cards




twinkl

St George's Day Maths Challenge Cards



There were 10 dragons. Two fly away.  
How many dragons were left?




twinkl.com

St George's Day Maths Challenge Cards



Is this castle symmetrical?




twinkl.com

St George's Day Maths Challenge Cards



George had 20 swords. He found 5 more.  
How many swords did he have altogether?



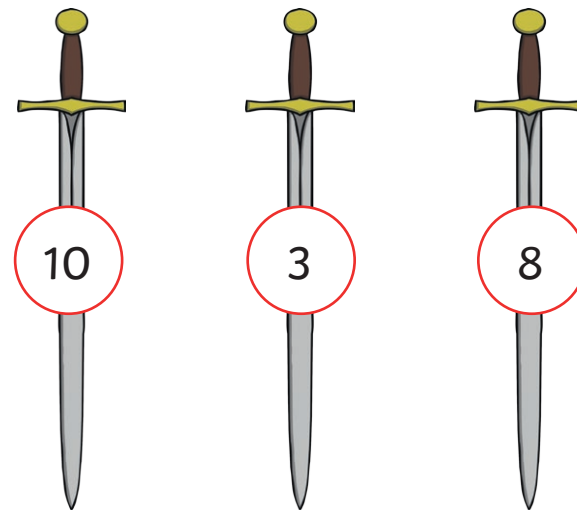
twinkl.com




50 red roses grew in a field. Another 10 grew.  
How many red roses were there in the field?




Put these numbers in order from least to greatest.



The princess needed to be home by 9.00.  
Which clock showed her the correct time?



St. George had 31 horses. 3 of them ran away.  
How many horses was St George left with?



George buys a drink for 30p.

How much change would he get from £1?



The princess has 9 maids to help her get ready.

Can you write the number 9 in words?



Each knight has two suits of armour.

How many suits of armour would five knights have altogether?



George saved one princess every day.

How many princesses did he save in two weeks?

