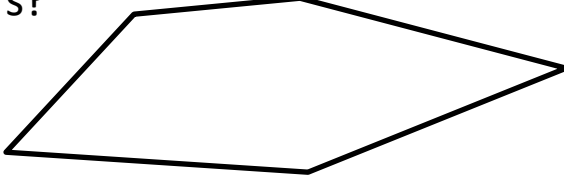




Name

Date



MENTAL MATHS QUIZ 2:2

1)	10 plus 10							
2)	Write down the number thirty-four.							
3)	How many corners? 							
4)	$20 + 6 = \underline{\quad}$							
5)	How much money? 	p						
6)	What is the missing number? <table border="1" style="margin-left: auto; margin-right: auto;"> <tr> <td>18</td> <td>17</td> <td></td> <td>15</td> <td>14</td> <td>13</td> </tr> </table>	18	17		15	14	13	
18	17		15	14	13			
7)	Circle the biggest number. <p style="text-align: center;">36 51 29 43 18</p>							
8)	What number comes before 70?							
9)	Frazer eats 8 pies. He eats 4 more. How many has he eaten?							
10)	Write am or pm in the correct place 7:30 in the morning = 7:30 _____ 4:20 in the afternoon = 4:20 _____							
11)	I have 12 toy cars. I lose 4 of them. How many do I have left?	cars						
12)	A beetle has 6 legs. How many legs do 2 beetles have? 	legs						

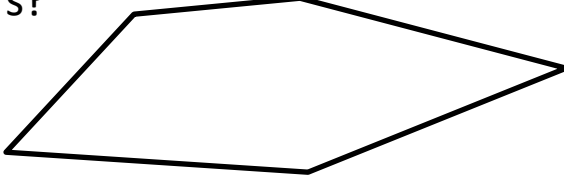




Name

Date



MENTAL MATHS QUIZ 2:2 ANSWERS

1)	10 plus 10	20						
2)	Write down the number thirty-four.	34						
3)	How many corners? 	5						
4)	$20 + 6 = \underline{26}$	26						
5)	How much money? 	30p						
6)	What is the missing number? <table border="1" style="margin-left: auto; margin-right: auto;"> <tr> <td>18</td> <td>17</td> <td><u>16</u></td> <td>15</td> <td>14</td> <td>13</td> </tr> </table>	18	17	<u>16</u>	15	14	13	16
18	17	<u>16</u>	15	14	13			
7)	Circle the biggest number. <p style="text-align: center;">36 51 29 43 18</p>							
8)	What number comes before 70?	69						
9)	Frazer eats 8 pies. He eats 4 more. How many has he eaten?	12						
10)	Write am or pm in the correct place 7:30 in the morning = 7:30 <u>am</u> 4:20 in the afternoon = 4:20 <u>pm</u>							
11)	I have 12 toy cars. I lose 4 of them. How many do I have left?	8 cars						
12)	A beetle has 6 legs. How many legs do 2 beetles have? 	12 legs						

