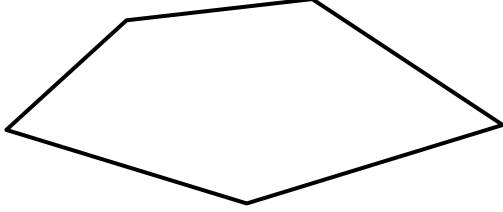



Name

Date



MENTAL MATHS SHEET 3:A1

1)	$5 + 7$	
2)	Half of 10	
3)	How many sides? 	
4)	$12 - 5$	
5)	Write down the number one hundred and eighty-two	
6)	$40 + 6$	
7)	Double 8	
8)	5×3	
9)	What is the next number? 24, 23, 22, 21, 20, ____	
10)	What is the value of the digit 5 in the number 57?	
11)	How many TENS make 40p?	
12)	A football costs £10. How much do 3 footballs cost?	
13)	How many minutes in an hour?	
14)	What is 10 more than 23?	
15)	How much money? 	p
16)	I am facing north. I turn a half-turn. What direction am I facing now?	

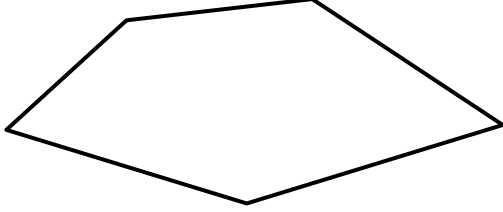



Name

Date



MENTAL MATHS SHEET 3:A1 ANSWERS

1)	$5 + 7$	12
2)	Half of 10	5
3)	How many sides? 	5
4)	$12 - 5$	7
5)	Write down the number one hundred and eighty-two	182
6)	$40 + 6$	46
7)	Double 8	16
8)	5×3	15
9)	What is the next number? 24, 23, 22, 21, 20, ____	19
10)	What is the value of the digit 5 in the number 57?	50
11)	How many TENS make 40p?	4
12)	A football costs £10. How much do 3 footballs cost?	£30
13)	How many minutes in an hour?	60
14)	What is 10 more than 23?	33
15)	How much money? 	27p
16)	I am facing north. I turn a half-turn. What direction am I facing now?	south

