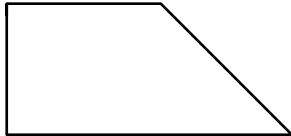



Name

Date



MENTAL MATHS QUIZ 4:3

1)	$7 + \underline{\quad} = 19$	
2)	How many sides does a hexagon have?	
3)	10×7	
4)	What is the value of the digit 1 in the number 4215?	
5)	Round 73 to the nearest 10	
6)	$28 - 25$	
7)	Half of 16	
8)	How many minutes in three quarters of an hour?	
9)	How many right angles can you see in the shape? 	
10)	The time is 10:20am. What will the time be in 2 hours?	
11)	What is the missing number in the sequence? 39, 37, 35, 33, 31, <u> </u>	
12)	$14 + 9 + 6$	
13)	Write down the number four hundred thirty-six	
14)	What is the total of all the coins? 	
15)	The date is 28 th April. What will the date be in 5 days' time?	
16)	How many mm is $3 \frac{1}{2}$ cm?	

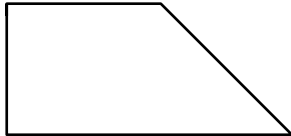



Name

Date



MENTAL MATHS QUIZ 4:3 ANSWERS

1)	$7 + \underline{\quad} = 19$	12
2)	How many sides does a hexagon have?	6
3)	10×7	70
4)	What is the value of the digit 1 in the number 4215?	10
5)	Round 73 to the nearest 10	70
6)	$28 - 25$	3
7)	Half of 16	8
8)	How many minutes in three quarters of an hour?	45
9)	How many right angles can you see in the shape? 	2
10)	The time is 10:20am. What will the time be in 2 hours?	12:20pm
11)	What is the missing number in the sequence? 39, 37, 35, 33, 31, <u> </u>	29
12)	$14 + 9 + 6$	29
13)	Write down the number four hundred thirty-six	436
14)	What is the total of all the coins? 	£2.05
15)	The date is 28 th April. What will the date be in 5 days' time?	3 rd May
16)	How many mm is $3 \frac{1}{2}$ cm?	35



Free Math Sheets, Math Games and Math Help

MATH-SALAMANDERS.COM