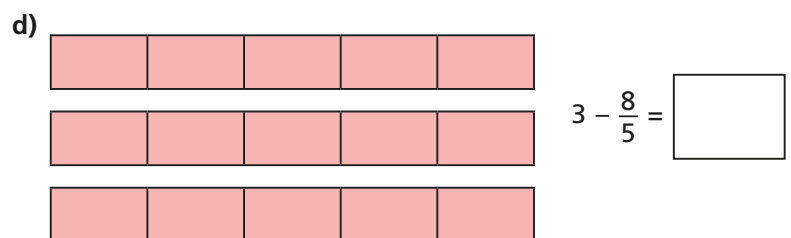
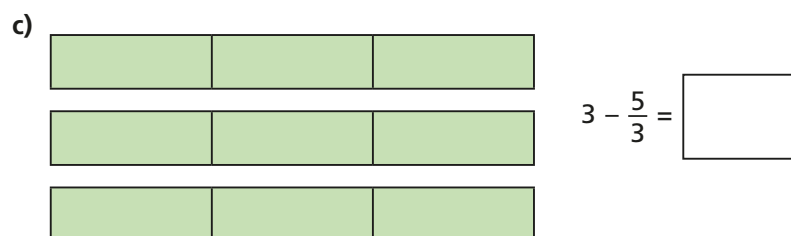

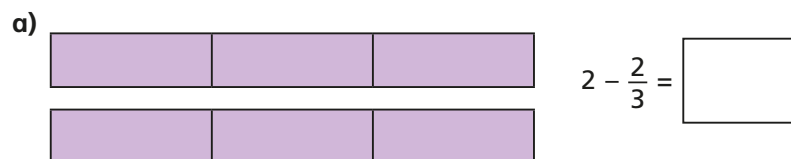


1 Use the bar models to help you subtract the fractions.



2 Work out the subtractions.

a) $\frac{8}{8} - \frac{5}{8}$

c) $2 - \frac{5}{8}$

e) $4 - \frac{5}{7}$

b) $1 - \frac{5}{8}$

d) $2 - \frac{5}{7}$

f) $4 - \frac{7}{5}$

3 Match the numbers with a difference of $\frac{3}{4}$

3

1

2

$2\frac{3}{4}$

$\frac{1}{4}$

$\frac{9}{4}$

4 Aisha has 4 pies.



a) Aisha gives $\frac{5}{8}$ of a pie to Mo.

How many pies does Aisha have left?

b) Aisha then gives 2 pies to Jack.

Calculate the difference between how much pie Aisha now has and how much pie Mo has.

2 Work out the subtractions.

a) $\frac{8}{8} - \frac{5}{8}$

c) $2 - \frac{5}{8}$

e) $4 - \frac{5}{7}$

b) $1 - \frac{5}{8}$

d) $2 - \frac{5}{7}$

f) $4 - \frac{7}{5}$

3 Match the numbers with a difference of $\frac{3}{4}$

3

1

2

$2\frac{3}{4}$

$\frac{1}{4}$

$\frac{9}{4}$

4 Aisha has 4 pies.



a) Aisha gives $\frac{5}{8}$ of a pie to Mo.

How many pies does Aisha have left?

b) Aisha then gives 2 pies to Jack.

Calculate the difference between how much pie Aisha now has and how much pie Mo has.

5 Alex is subtracting fractions.



Explain why Alex is incorrect.

6 Complete the calculations.

a) $3 - \square = 2\frac{3}{10}$

c) $\square - \frac{7}{12} = 3\frac{5}{12}$

b) $4 - \square = 3\frac{3}{8}$

d) $\square - \frac{5}{12} = 13\frac{7}{12}$

7 Teddy has 4 litres of juice and 3 jugs.



Teddy pours $\frac{3}{4}$ of a litre into each jug.

How much juice does Teddy have left?