


Name \_\_\_\_\_

1 Max has 39 apples.



He puts them into bags.

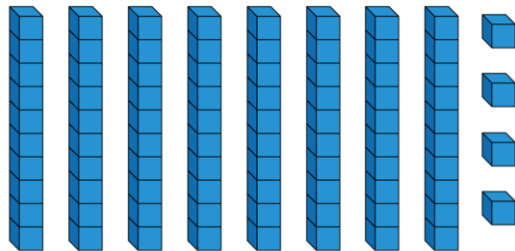
He puts 3 apples in each bag.

How many bags does he need?

\_\_\_\_\_ bags

1 mark

2 Work out  $84 \div 4 =$

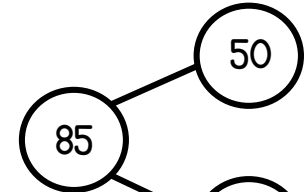



1 mark

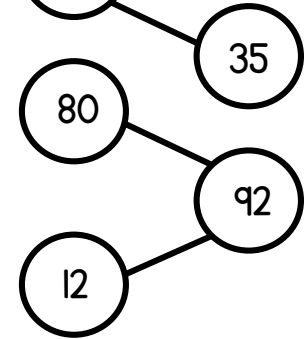
3 Calculate the divisions.

Use the part-whole models to help you.

$$85 \div 5 = \square$$




$$92 \div 4 = \square$$



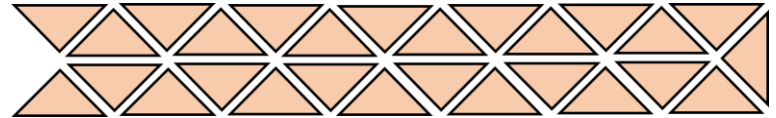

1 mark

1 mark

4 Gina is making squares using triangles.



Gina has 27 triangles.



How many complete squares can Gina make?

\_\_\_\_\_ squares

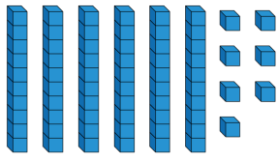
1 mark

How many triangles does she have left over?

\_\_\_\_\_ triangles

1 mark

5 Work out  $67 \div 3 =$



1 mark

6 The length of 5 identical pencils is 95 cm.  
What is the length of 1 of the pencils?

\_\_\_\_\_ cm

1 mark

What is the length of 2 of the pencils?

\_\_\_\_\_ cm

1 mark

7 Some doughnuts are shared between boxes.  
There are 6 doughnuts in each box.  
There is 1 doughnut left over.  
Circle how many doughnuts there could be.

65

66

67

68

1 mark

Explain your answer.

1 mark

8 696 pens are packed into boxes of 3



How many boxes are there?

\_\_\_\_\_ boxes

1 mark

9 Work out

$$126 \div 3 = \underline{\quad\quad} \quad 675 \div 5 = \underline{\quad\quad}$$

2 marks

10 Complete the missing number.

$$\boxed{\quad\quad} \div 4 = 134 \text{ r } 1$$

1 mark

Circle how confident you feel with division.

1                      2                      3                      4                      5  
Not                      Very  
confident                      confident