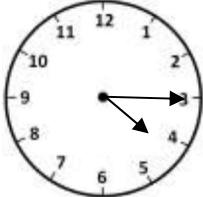




Name

Date



# MENTAL MATHS SHEET 3:A7

1)	$82 - 10$	
2)	How many 3s make 12?	
3)	What is the time in digital? 	
4)	$300 + 6$	
5)	What fraction is shaded? 	
6)	Double 6 = $10 + \underline{\quad}$	
7)	How many g in 2 kilograms?	
8)	I have £1. I buy a piece of candy for 25p. How much money do I have left?	
9)	Measure this line in cm. 	
10)	$178 = 100 + \underline{\quad} + 8$	
11)	$40 \text{ minutes} + 30 \text{ minutes} = \underline{\quad} \text{ hours } \underline{\quad} \text{ minutes}$	
12)	A gallon is 8 pints. How many pints in $1\frac{1}{2}$ gallons?	
13)	A skipping rope is ... <i>2cm 20cm 200cm or 2000cm</i> long?	
14)	What is 100 more than 360?	
15)	Half of a number is 7. What is the number?	
16)	7 TENS + 1 FIVE + 3 TWOS	<b>p</b>