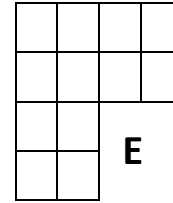
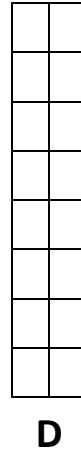
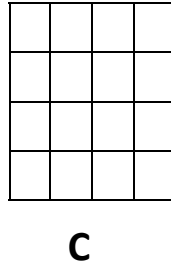

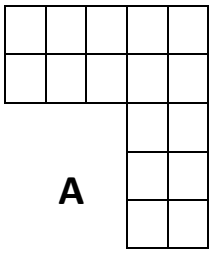


A

- 1 Sort the shapes into the Carroll diagram. The shapes aren't drawn to scale, but one box covers 1cm^2 .

	Shape has 4 sides	Shape doesn't have 4 sides
Area of 12cm^2		
Area of 16cm^2		



- 2 Draw another shape that would fit into each box from the diagram above.

- 3 Draw at least two rectangles for each of the following areas:

8cm^2

11cm^2

16cm^2

24cm^2