





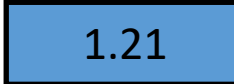


A

Ones	Tenths	Hundredths
		 

There are..... ones, ..... tenths and ..... hundredths. The number is .....

Represent the numbers in the place value chart above.

			
---	---	---	---

Write down the value of the underlined digit in words.

$2.\underline{4}3 =$

$2.1\underline{2} =$

Write down the value of the underlined digit in figures.

$0.0\underline{7} =$

$1.\underline{1}5 =$

$0.84 = \dots\dots\dots + 0.04 = \dots\dots\dots\text{tenths and 4 hundredths}$

$0.25 = \dots\dots\dots + 0.05 = \dots\dots\dots\text{tenths and } \dots\dots\dots\text{ hundredths}$

$0.25 = 0.1 + \dots\dots\dots = \dots\dots\dots\text{tenths and fifteen hundredths.}$