


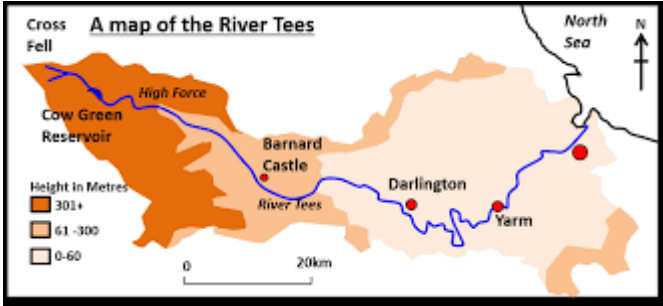

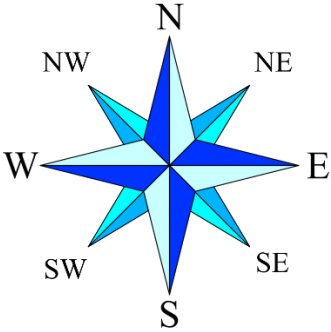


Yarm Primary School		
Year 3	Location, Location, Location	Enquiry Question: <i>How well do you know the world you live in?</i>
<b>Let's go...</b> During this Geography focus we are learning the important <b>geographical</b> skills of a <b>cartographer</b> to develop our understanding of the world we live in. This is a photograph of <b>Yarm</b> Town Hall. 	<b>Exploring the UK...</b> The map below shows a map of the <b>United Kingdom</b> :  Can you locate Yarm on a map?	<b>Where in the World...?</b> The map below shows where the United Kingdom is in relation to other countries in the <b>world</b> : 
<b>Key Vocabulary:</b> sketch map      symbol aerial view      cartographer feature      scale landmark      land use distance      population key      coastal		<b>Did you know?</b> The <b>River Tees</b> runs through Yarm. The <b>source</b> of the River Tees is located in the <b>northern</b> Pennines (Cross Fell). It runs <b>eastwards</b> for approx. 85 miles to its <b>mouth</b> where the river joins the <b>North Sea</b> between Hartlepool and Redcar, (near Middlesbrough).
<b>Key Knowledge:</b> Yarm is in the <b>county</b> of Cleveland in the <b>North East</b> of England. The tallest mountain in <b>England</b> is Scafell Pike in the Lake District – 978m tall. The tallest mountain in <b>Scotland</b> (and the UK) is Ben Nevis – 1344m. The tallest mountain in <b>Wales</b> is Snowdon 1085m The tallest mountain in <b>Northern Ireland</b> is Slieve Donard (Co. Down) – 850m		



## Yarm Primary School

Year 3	<b>Location, Location, Location</b>	Enquiry Question: <b><i>How well do you know the world you live in?</i></b>	
<b>Key Vocabulary and Knowledge:</b>		<b>Let's find out...</b>	<b>Suggested Activities:</b>
urban	river	<p>Look at the <b>map</b> below and follow the River Tees from its source in the Pennines to its mouth where it joins the North Sea.</p>  <p>What does an <b>aerial</b> view of the River Tees look like?</p>  <p>How is an aerial view different from a map of the River Tees?</p>	<ul style="list-style-type: none"> <li>Look at the United Kingdom using a map, atlas or globe.</li> <li>Find the 4 <b>countries</b> that make up the United Kingdom. What is the <b>capital city</b> of each one?</li> <li>Which <b>river</b> flows through <b>Yarm</b>?</li> <li>What <b>features</b> should a map have? Can you list them?</li> <li>Go for a walk in and around Yarm High Street. (For example, town hall, river, bridge, railway line (viaduct). Take a photo. Can you draw a <b>sketch map</b> of Yarm showing these?</li> <li>Look at the shops in Yarm High Street. What kinds of businesses can you spot?</li> <li>Look at a map, plan or guide for a tourist attraction. Does it have a <b>key</b>? What information does this provide?</li> <li>Design your own guide for a favourite place you like to visit.</li> </ul>
town	sea		
city	ocean		
rural	hill		
village	mountain		
county	country		
continent	location		
compass points  <p>Can you name the points shown on this compass?</p>			