
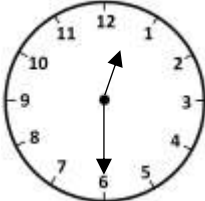


Name

Date



# MENTAL MATHS SHEET 3:A6

1)	$4 + 7 + 6$	
2)	Subtract 3 from 15	
3)	How many 2s make 12?	
4)	$300 + \underline{\quad} + 4 = 354$	
5)	How much money? 	p
6)	What is the next number? <b>58, 60, 62, 64, 66, 68, <u>    </u></b>	
7)	What number is 10 more than 39?	
8)	$5 \times 2 = 7 + \underline{\quad}$	
9)	How many minutes in quarter of an hour?	
10)	What is the time? 	
11)	1 pound = 16 ounces. How many ounces in 2 pounds?	
12)	1 TWENTY + 2 TENS + 4 FIVES	
13)	The date is 6 <sup>th</sup> March. What will the date be in 3 months' time?	
14)	$528 \text{ cm} = \underline{\quad} \text{ m } \underline{\quad} \text{ cm}$	
15)	Which of these numbers is even? <b>47 51 76 87 93</b>	
16)	How many socks in 10 pairs?	


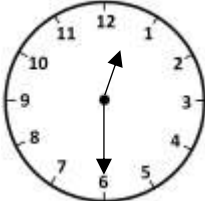


Name

Date



# MENTAL MATHS SHEET 3:A6 ANSWERS

1)	$4 + 7 + 6$	<b>17</b>
2)	Subtract 3 from 15	<b>12</b>
3)	How many 2s make 12?	<b>6</b>
4)	$300 + \underline{\quad} + 4 = 354$	<b>50</b>
5)	How much money? 	<b>56p</b>
6)	What is the next number? <b>58, 60, 62, 64, 66, 68, <u>    </u></b>	<b>70</b>
7)	What number is 10 more than 39?	<b>49</b>
8)	$5 \times 2 = 7 + \underline{\quad}$	<b>3</b>
9)	How many minutes in quarter of an hour?	<b>15</b>
10)	What is the time? 	<b>12:30</b>
11)	1 pound = 16 ounces. How many ounces in 2 pounds?	<b>32</b>
12)	1 TWENTY + 2 TENS + 4 FIVES	<b>60p</b>
13)	The date is 6 <sup>th</sup> March. What will the date be in 3 months' time?	<b>6<sup>th</sup> June</b>
14)	$528 \text{ cm} = \underline{\quad} \text{ m } \underline{\quad} \text{ cm}$	<b>5m 28cm</b>
15)	Which of these numbers is even? <b>47 51 76 87 93</b>	<b>76</b>
16)	How many socks in 10 pairs?	<b>20</b>

